


A

Number correct:



Name \_\_\_\_\_


Date \_\_\_\_\_

\*Write the number of dots. Find 1 or 2 groups that make finding the total number of dots easier!

1			16		
2			17		
3			18		
4			19		
5			20		
6			21		
7			22		
8			23		
9			24		
10			25		
11			26		
12			27		
13			28		
14			29		
15			30		

B

Number correct:



Name \_\_\_\_\_


Date \_\_\_\_\_

\*Write the number of dots. Find 1 or 2 groups that make finding the total number of dots easier!

1			16		
2			17		
3			18		
4			19		
5			20		
6			21		
7			22		
8			23		
9			24		
10			25		
11			26		
12			27		
13			28		
14			29		
15			30		

Name \_\_\_\_\_

Date \_\_\_\_\_



### Number Bond Dash!

Directions: Do as many as you can in 60 seconds. Write the amount you finished here:

1.	2.	3.	4.	5.
6.	7.	8.	9.	10.
11.	12.	13.	14.	15.
16.	17.	18.	19.	20.
21.	22.	23.	24.	25.

Name \_\_\_\_\_

Date \_\_\_\_\_


### Number Bond Dash!

Directions: Do as many as you can in 60 seconds. Write the amount you finished here:

1.	2.	3.	4.	5.
6.	7.	8.	9.	10.
11.	12.	13.	14.	15.
16.	17.	18.	19.	20.
21.	22.	23.	24.	25.

A

Number correct:



Name \_\_\_\_\_


Date \_\_\_\_\_

\*Write the number that is 1 more.

1			16		
2			17	9	
3			18	7	
4			19		
5			20	8	
6			21	7	
7			22		
8	5		23		
9			24	10	
10	6		25		
11			26		
12	7		27		
13			28	9	
14			29		
15	8		30		

**B**

Number correct:




Name \_\_\_\_\_

Date \_\_\_\_\_

\*Write the number that is 1 more.

1	●●		16	●●●●● ●●●	
2	●		17	8	
3	●●		18	9	
4	●●●		19	●●●●● ●●●●	
5	●●●●		20	●●●●● ●●●●●	
6	●●●●●		21	10	
7	●●●●		22	●●●●● ●●●	
8	4		23	●●●●● ●●●●	
9	●●●●●		24	10	
10	5		25	●●●●● ●●●●	
11	●●●●●		26	●● ●● ● ●● ●●	
12	7		27	●● ●● ●● ●●	
13	●●●●● ●●		28	8	
14	●●●●● ●		29	●● ●● ●● ●● ●●	
15	6		30	●●● ●●● ●● ●●●	



Name \_\_\_\_\_

Date \_\_\_\_\_

### Number Bond Dash!


**Directions:** Do as many as you can in 90 seconds. Write the amount you finished here:

1.	2.	3.	4.	5.
6.	7.	8.	9.	10.
11.	12.	13.	14.	15.
16.	17.	18.	19.	20.
21.	22.	23.	24.	25.

© Kelly Spinks

Name \_\_\_\_\_

Date \_\_\_\_\_



### Number Bond Dash!


Directions: Do as many as you can in 90 seconds. Write the amount you finished here:

1.	<div style="border: 1px solid black; padding: 5px; display: inline-block; text-align: center;">7</div> <div style="display: flex; justify-content: space-around; width: 100px;"><div style="border: 1px solid black; padding: 5px; text-align: center;">6</div><div style="border: 1px solid black; width: 30px; height: 30px;"></div></div>	2.	<div style="border: 1px solid black; padding: 5px; display: inline-block; text-align: center;">7</div> <div style="display: flex; justify-content: space-around; width: 100px;"><div style="border: 1px solid black; padding: 5px; text-align: center;">7</div><div style="border: 1px solid black; width: 30px; height: 30px;"></div></div>	3.	<div style="border: 1px solid black; padding: 5px; display: inline-block; text-align: center;">7</div> <div style="display: flex; justify-content: space-around; width: 100px;"><div style="border: 1px solid black; padding: 5px; text-align: center;">6</div><div style="border: 1px solid black; width: 30px; height: 30px;"></div></div>	4.	<div style="border: 1px solid black; padding: 5px; display: inline-block; text-align: center;">7</div> <div style="display: flex; justify-content: space-around; width: 100px;"><div style="border: 1px solid black; padding: 5px; text-align: center;">5</div><div style="border: 1px solid black; width: 30px; height: 30px;"></div></div>	5.	<div style="border: 1px solid black; padding: 5px; display: inline-block; text-align: center;">7</div> <div style="display: flex; justify-content: space-around; width: 100px;"><div style="border: 1px solid black; padding: 5px; text-align: center;">6</div><div style="border: 1px solid black; width: 30px; height: 30px;"></div></div>
6.	<div style="border: 1px solid black; padding: 5px; display: inline-block; text-align: center;">7</div> <div style="display: flex; justify-content: space-around; width: 100px;"><div style="border: 1px solid black; width: 30px; height: 30px;"></div><div style="border: 1px solid black; padding: 5px; text-align: center;">7</div></div>	7.	<div style="border: 1px solid black; padding: 5px; display: inline-block; text-align: center;">7</div> <div style="display: flex; justify-content: space-around; width: 100px;"><div style="border: 1px solid black; width: 30px; height: 30px;"></div><div style="border: 1px solid black; padding: 5px; text-align: center;">6</div></div>	8.	<div style="border: 1px solid black; padding: 5px; display: inline-block; text-align: center;">7</div> <div style="display: flex; justify-content: space-around; width: 100px;"><div style="border: 1px solid black; width: 30px; height: 30px;"></div><div style="border: 1px solid black; padding: 5px; text-align: center;">5</div></div>	9.	<div style="border: 1px solid black; padding: 5px; display: inline-block; text-align: center;">7</div> <div style="display: flex; justify-content: space-around; width: 100px;"><div style="border: 1px solid black; width: 30px; height: 30px;"></div><div style="border: 1px solid black; padding: 5px; text-align: center;">4</div></div>	10.	<div style="border: 1px solid black; padding: 5px; display: inline-block; text-align: center;">7</div> <div style="display: flex; justify-content: space-around; width: 100px;"><div style="border: 1px solid black; width: 30px; height: 30px;"></div><div style="border: 1px solid black; padding: 5px; text-align: center;">3</div></div>
11.	<div style="border: 1px solid black; padding: 5px; display: inline-block; text-align: center;">7</div> <div style="display: flex; justify-content: space-around; width: 100px;"><div style="border: 1px solid black; padding: 5px; text-align: center;">4</div><div style="border: 1px solid black; width: 30px; height: 30px;"></div></div>	12.	<div style="border: 1px solid black; padding: 5px; display: inline-block; text-align: center;">7</div> <div style="display: flex; justify-content: space-around; width: 100px;"><div style="border: 1px solid black; padding: 5px; text-align: center;">3</div><div style="border: 1px solid black; width: 30px; height: 30px;"></div></div>	13.	<div style="border: 1px solid black; padding: 5px; display: inline-block; text-align: center;">7</div> <div style="display: flex; justify-content: space-around; width: 100px;"><div style="border: 1px solid black; padding: 5px; text-align: center;">2</div><div style="border: 1px solid black; width: 30px; height: 30px;"></div></div>	14.	<div style="border: 1px solid black; padding: 5px; display: inline-block; text-align: center;">7</div> <div style="display: flex; justify-content: space-around; width: 100px;"><div style="border: 1px solid black; padding: 5px; text-align: center;">5</div><div style="border: 1px solid black; width: 30px; height: 30px;"></div></div>	15.	<div style="border: 1px solid black; padding: 5px; display: inline-block; text-align: center;">7</div> <div style="display: flex; justify-content: space-around; width: 100px;"><div style="border: 1px solid black; padding: 5px; text-align: center;">2</div><div style="border: 1px solid black; width: 30px; height: 30px;"></div></div>
16.	<div style="border: 1px solid black; padding: 5px; display: inline-block; text-align: center;">7</div> <div style="display: flex; justify-content: space-around; width: 100px;"><div style="border: 1px solid black; width: 30px; height: 30px;"></div><div style="border: 1px solid black; padding: 5px; text-align: center;">6</div></div>	17.	<div style="border: 1px solid black; padding: 5px; display: inline-block; text-align: center;">7</div> <div style="display: flex; justify-content: space-around; width: 100px;"><div style="border: 1px solid black; width: 30px; height: 30px;"></div><div style="border: 1px solid black; padding: 5px; text-align: center;">1</div></div>	18.	<div style="border: 1px solid black; padding: 5px; display: inline-block; text-align: center;">7</div> <div style="display: flex; justify-content: space-around; width: 100px;"><div style="border: 1px solid black; width: 30px; height: 30px;"></div><div style="border: 1px solid black; padding: 5px; text-align: center;">0</div></div>	19.	<div style="border: 1px solid black; padding: 5px; display: inline-block; text-align: center;">7</div> <div style="display: flex; justify-content: space-around; width: 100px;"><div style="border: 1px solid black; width: 30px; height: 30px;"></div><div style="border: 1px solid black; padding: 5px; text-align: center;">2</div></div>	20.	<div style="border: 1px solid black; padding: 5px; display: inline-block; text-align: center;">7</div> <div style="display: flex; justify-content: space-around; width: 100px;"><div style="border: 1px solid black; width: 30px; height: 30px;"></div><div style="border: 1px solid black; padding: 5px; text-align: center;">5</div></div>
21.	<div style="border: 1px solid black; padding: 5px; display: inline-block; text-align: center;">7</div> <div style="display: flex; justify-content: space-around; width: 100px;"><div style="border: 1px solid black; padding: 5px; text-align: center;">1</div><div style="border: 1px solid black; width: 30px; height: 30px;"></div></div>	22.	<div style="border: 1px solid black; padding: 5px; display: inline-block; text-align: center;">7</div> <div style="display: flex; justify-content: space-around; width: 100px;"><div style="border: 1px solid black; padding: 5px; text-align: center;">5</div><div style="border: 1px solid black; width: 30px; height: 30px;"></div></div>	23.	<div style="border: 1px solid black; padding: 5px; display: inline-block; text-align: center;">7</div> <div style="display: flex; justify-content: space-around; width: 100px;"><div style="border: 1px solid black; padding: 5px; text-align: center;">3</div><div style="border: 1px solid black; width: 30px; height: 30px;"></div></div>	24.	<div style="border: 1px solid black; padding: 5px; display: inline-block; text-align: center;">7</div> <div style="display: flex; justify-content: space-around; width: 100px;"><div style="border: 1px solid black; padding: 5px; text-align: center;">0</div><div style="border: 1px solid black; width: 30px; height: 30px;"></div></div>	25.	<div style="border: 1px solid black; padding: 5px; display: inline-block; text-align: center;">7</div> <div style="display: flex; justify-content: space-around; width: 100px;"><div style="border: 1px solid black; padding: 5px; text-align: center;">6</div><div style="border: 1px solid black; width: 30px; height: 30px;"></div></div>

© Kelly Spinks

Name \_\_\_\_\_

Date \_\_\_\_\_




### Number Bond Dash!

Directions: Do as many as you can in 90 seconds. Write the amount you finished here:

1.	<div style="border: 1px solid black; width: 40px; height: 40px; margin: 0 auto; text-align: center; line-height: 40px;">8</div> <div style="display: flex; justify-content: space-around; margin-top: 10px;"><div style="border: 1px solid black; width: 40px; height: 40px; text-align: center; line-height: 40px;">8</div><div style="border: 1px solid black; width: 40px; height: 40px;"></div></div>	2.	<div style="border: 1px solid black; width: 40px; height: 40px; margin: 0 auto; text-align: center; line-height: 40px;">8</div> <div style="display: flex; justify-content: space-around; margin-top: 10px;"><div style="border: 1px solid black; width: 40px; height: 40px; text-align: center; line-height: 40px;">7</div><div style="border: 1px solid black; width: 40px; height: 40px;"></div></div>	3.	<div style="border: 1px solid black; width: 40px; height: 40px; margin: 0 auto; text-align: center; line-height: 40px;">8</div> <div style="display: flex; justify-content: space-around; margin-top: 10px;"><div style="border: 1px solid black; width: 40px; height: 40px; text-align: center; line-height: 40px;">6</div><div style="border: 1px solid black; width: 40px; height: 40px;"></div></div>	4.	<div style="border: 1px solid black; width: 40px; height: 40px; margin: 0 auto; text-align: center; line-height: 40px;">8</div> <div style="display: flex; justify-content: space-around; margin-top: 10px;"><div style="border: 1px solid black; width: 40px; height: 40px; text-align: center; line-height: 40px;">7</div><div style="border: 1px solid black; width: 40px; height: 40px;"></div></div>	5.	<div style="border: 1px solid black; width: 40px; height: 40px; margin: 0 auto; text-align: center; line-height: 40px;">8</div> <div style="display: flex; justify-content: space-around; margin-top: 10px;"><div style="border: 1px solid black; width: 40px; height: 40px; text-align: center; line-height: 40px;">6</div><div style="border: 1px solid black; width: 40px; height: 40px;"></div></div>
6.	<div style="border: 1px solid black; width: 40px; height: 40px; margin: 0 auto; text-align: center; line-height: 40px;">8</div> <div style="display: flex; justify-content: space-around; margin-top: 10px;"><div style="border: 1px solid black; width: 40px; height: 40px;"></div><div style="border: 1px solid black; width: 40px; height: 40px; text-align: center; line-height: 40px;">5</div></div>	7.	<div style="border: 1px solid black; width: 40px; height: 40px; margin: 0 auto; text-align: center; line-height: 40px;">8</div> <div style="display: flex; justify-content: space-around; margin-top: 10px;"><div style="border: 1px solid black; width: 40px; height: 40px;"></div><div style="border: 1px solid black; width: 40px; height: 40px; text-align: center; line-height: 40px;">6</div></div>	8.	<div style="border: 1px solid black; width: 40px; height: 40px; margin: 0 auto; text-align: center; line-height: 40px;">8</div> <div style="display: flex; justify-content: space-around; margin-top: 10px;"><div style="border: 1px solid black; width: 40px; height: 40px;"></div><div style="border: 1px solid black; width: 40px; height: 40px; text-align: center; line-height: 40px;">5</div></div>	9.	<div style="border: 1px solid black; width: 40px; height: 40px; margin: 0 auto; text-align: center; line-height: 40px;">8</div> <div style="display: flex; justify-content: space-around; margin-top: 10px;"><div style="border: 1px solid black; width: 40px; height: 40px;"></div><div style="border: 1px solid black; width: 40px; height: 40px; text-align: center; line-height: 40px;">4</div></div>	10.	<div style="border: 1px solid black; width: 40px; height: 40px; margin: 0 auto; text-align: center; line-height: 40px;">8</div> <div style="display: flex; justify-content: space-around; margin-top: 10px;"><div style="border: 1px solid black; width: 40px; height: 40px;"></div><div style="border: 1px solid black; width: 40px; height: 40px; text-align: center; line-height: 40px;">3</div></div>
11.	<div style="border: 1px solid black; width: 40px; height: 40px; margin: 0 auto; text-align: center; line-height: 40px;">8</div> <div style="display: flex; justify-content: space-around; margin-top: 10px;"><div style="border: 1px solid black; width: 40px; height: 40px; text-align: center; line-height: 40px;">4</div><div style="border: 1px solid black; width: 40px; height: 40px;"></div></div>	12.	<div style="border: 1px solid black; width: 40px; height: 40px; margin: 0 auto; text-align: center; line-height: 40px;">8</div> <div style="display: flex; justify-content: space-around; margin-top: 10px;"><div style="border: 1px solid black; width: 40px; height: 40px; text-align: center; line-height: 40px;">5</div><div style="border: 1px solid black; width: 40px; height: 40px;"></div></div>	13.	<div style="border: 1px solid black; width: 40px; height: 40px; margin: 0 auto; text-align: center; line-height: 40px;">8</div> <div style="display: flex; justify-content: space-around; margin-top: 10px;"><div style="border: 1px solid black; width: 40px; height: 40px; text-align: center; line-height: 40px;">3</div><div style="border: 1px solid black; width: 40px; height: 40px;"></div></div>	14.	<div style="border: 1px solid black; width: 40px; height: 40px; margin: 0 auto; text-align: center; line-height: 40px;">8</div> <div style="display: flex; justify-content: space-around; margin-top: 10px;"><div style="border: 1px solid black; width: 40px; height: 40px; text-align: center; line-height: 40px;">4</div><div style="border: 1px solid black; width: 40px; height: 40px;"></div></div>	15.	<div style="border: 1px solid black; width: 40px; height: 40px; margin: 0 auto; text-align: center; line-height: 40px;">8</div> <div style="display: flex; justify-content: space-around; margin-top: 10px;"><div style="border: 1px solid black; width: 40px; height: 40px; text-align: center; line-height: 40px;">3</div><div style="border: 1px solid black; width: 40px; height: 40px;"></div></div>
16.	<div style="border: 1px solid black; width: 40px; height: 40px; margin: 0 auto; text-align: center; line-height: 40px;">8</div> <div style="display: flex; justify-content: space-around; margin-top: 10px;"><div style="border: 1px solid black; width: 40px; height: 40px;"></div><div style="border: 1px solid black; width: 40px; height: 40px; text-align: center; line-height: 40px;">6</div></div>	17.	<div style="border: 1px solid black; width: 40px; height: 40px; margin: 0 auto; text-align: center; line-height: 40px;">8</div> <div style="display: flex; justify-content: space-around; margin-top: 10px;"><div style="border: 1px solid black; width: 40px; height: 40px;"></div><div style="border: 1px solid black; width: 40px; height: 40px; text-align: center; line-height: 40px;">2</div></div>	18.	<div style="border: 1px solid black; width: 40px; height: 40px; margin: 0 auto; text-align: center; line-height: 40px;">8</div> <div style="display: flex; justify-content: space-around; margin-top: 10px;"><div style="border: 1px solid black; width: 40px; height: 40px;"></div><div style="border: 1px solid black; width: 40px; height: 40px; text-align: center; line-height: 40px;">6</div></div>	19.	<div style="border: 1px solid black; width: 40px; height: 40px; margin: 0 auto; text-align: center; line-height: 40px;">8</div> <div style="display: flex; justify-content: space-around; margin-top: 10px;"><div style="border: 1px solid black; width: 40px; height: 40px;"></div><div style="border: 1px solid black; width: 40px; height: 40px; text-align: center; line-height: 40px;">5</div></div>	20.	<div style="border: 1px solid black; width: 40px; height: 40px; margin: 0 auto; text-align: center; line-height: 40px;">8</div> <div style="display: flex; justify-content: space-around; margin-top: 10px;"><div style="border: 1px solid black; width: 40px; height: 40px;"></div><div style="border: 1px solid black; width: 40px; height: 40px; text-align: center; line-height: 40px;">3</div></div>
21.	<div style="border: 1px solid black; width: 40px; height: 40px; margin: 0 auto; text-align: center; line-height: 40px;">8</div> <div style="display: flex; justify-content: space-around; margin-top: 10px;"><div style="border: 1px solid black; width: 40px; height: 40px; text-align: center; line-height: 40px;">4</div><div style="border: 1px solid black; width: 40px; height: 40px;"></div></div>	22.	<div style="border: 1px solid black; width: 40px; height: 40px; margin: 0 auto; text-align: center; line-height: 40px;">8</div> <div style="display: flex; justify-content: space-around; margin-top: 10px;"><div style="border: 1px solid black; width: 40px; height: 40px; text-align: center; line-height: 40px;">1</div><div style="border: 1px solid black; width: 40px; height: 40px;"></div></div>	23.	<div style="border: 1px solid black; width: 40px; height: 40px; margin: 0 auto; text-align: center; line-height: 40px;">8</div> <div style="display: flex; justify-content: space-around; margin-top: 10px;"><div style="border: 1px solid black; width: 40px; height: 40px; text-align: center; line-height: 40px;">2</div><div style="border: 1px solid black; width: 40px; height: 40px;"></div></div>	24.	<div style="border: 1px solid black; width: 40px; height: 40px; margin: 0 auto; text-align: center; line-height: 40px;">8</div> <div style="display: flex; justify-content: space-around; margin-top: 10px;"><div style="border: 1px solid black; width: 40px; height: 40px; text-align: center; line-height: 40px;">0</div><div style="border: 1px solid black; width: 40px; height: 40px;"></div></div>	25.	<div style="border: 1px solid black; width: 40px; height: 40px; margin: 0 auto; text-align: center; line-height: 40px;">8</div> <div style="display: flex; justify-content: space-around; margin-top: 10px;"><div style="border: 1px solid black; width: 40px; height: 40px; text-align: center; line-height: 40px;">1</div><div style="border: 1px solid black; width: 40px; height: 40px;"></div></div>

Name \_\_\_\_\_

Date \_\_\_\_\_



### Number Bond Dash!

Directions: Do as many as you can in 90 seconds. Write the amount you finished here:

1.	2.	3.	4.	5.
6.	7.	8.	9.	10.
11.	12.	13.	14.	15.
16.	17.	18.	19.	20.
21.	22.	23.	24.	25.

© Kelly Spinks



Lesson 8:

Date:


Represent all the number pairs of 10 as number bond diagrams from a given scenario and generate all expressions equal to 10.  
6/24/13

engage<sup>ny</sup>

1.B.58

Name \_\_\_\_\_

Date \_\_\_\_\_

**Number Bond Dash!**


Directions: Do as many as you can in 90 seconds. Write the amount you finished here:

1.	<div style="border: 1px solid black; padding: 5px; text-align: center;">10</div> <div style="display: flex; justify-content: space-around; margin-top: 10px;"><div style="border: 1px solid black; padding: 5px; text-align: center;">10</div><div style="border: 1px solid black; width: 30px; height: 30px;"></div></div>	2.	<div style="border: 1px solid black; padding: 5px; text-align: center;">10</div> <div style="display: flex; justify-content: space-around; margin-top: 10px;"><div style="border: 1px solid black; padding: 5px; text-align: center;">9</div><div style="border: 1px solid black; width: 30px; height: 30px;"></div></div>	3.	<div style="border: 1px solid black; padding: 5px; text-align: center;">10</div> <div style="display: flex; justify-content: space-around; margin-top: 10px;"><div style="border: 1px solid black; padding: 5px; text-align: center;">8</div><div style="border: 1px solid black; width: 30px; height: 30px;"></div></div>	4.	<div style="border: 1px solid black; padding: 5px; text-align: center;">10</div> <div style="display: flex; justify-content: space-around; margin-top: 10px;"><div style="border: 1px solid black; padding: 5px; text-align: center;">9</div><div style="border: 1px solid black; width: 30px; height: 30px;"></div></div>	5.	<div style="border: 1px solid black; padding: 5px; text-align: center;">10</div> <div style="display: flex; justify-content: space-around; margin-top: 10px;"><div style="border: 1px solid black; padding: 5px; text-align: center;">10</div><div style="border: 1px solid black; width: 30px; height: 30px;"></div></div>
6.	<div style="border: 1px solid black; padding: 5px; text-align: center;">10</div> <div style="display: flex; justify-content: space-around; margin-top: 10px;"><div style="border: 1px solid black; width: 30px; height: 30px;"></div><div style="border: 1px solid black; padding: 5px; text-align: center;">9</div></div>	7.	<div style="border: 1px solid black; padding: 5px; text-align: center;">10</div> <div style="display: flex; justify-content: space-around; margin-top: 10px;"><div style="border: 1px solid black; width: 30px; height: 30px;"></div><div style="border: 1px solid black; padding: 5px; text-align: center;">8</div></div>	8.	<div style="border: 1px solid black; padding: 5px; text-align: center;">10</div> <div style="display: flex; justify-content: space-around; margin-top: 10px;"><div style="border: 1px solid black; width: 30px; height: 30px;"></div><div style="border: 1px solid black; padding: 5px; text-align: center;">7</div></div>	9.	<div style="border: 1px solid black; padding: 5px; text-align: center;">10</div> <div style="display: flex; justify-content: space-around; margin-top: 10px;"><div style="border: 1px solid black; width: 30px; height: 30px;"></div><div style="border: 1px solid black; padding: 5px; text-align: center;">8</div></div>	10.	<div style="border: 1px solid black; padding: 5px; text-align: center;">10</div> <div style="display: flex; justify-content: space-around; margin-top: 10px;"><div style="border: 1px solid black; width: 30px; height: 30px;"></div><div style="border: 1px solid black; padding: 5px; text-align: center;">7</div></div>
11.	<div style="border: 1px solid black; padding: 5px; text-align: center;">10</div> <div style="display: flex; justify-content: space-around; margin-top: 10px;"><div style="border: 1px solid black; padding: 5px; text-align: center;">6</div><div style="border: 1px solid black; width: 30px; height: 30px;"></div></div>	12.	<div style="border: 1px solid black; padding: 5px; text-align: center;">10</div> <div style="display: flex; justify-content: space-around; margin-top: 10px;"><div style="border: 1px solid black; padding: 5px; text-align: center;">7</div><div style="border: 1px solid black; width: 30px; height: 30px;"></div></div>	13.	<div style="border: 1px solid black; padding: 5px; text-align: center;">10</div> <div style="display: flex; justify-content: space-around; margin-top: 10px;"><div style="border: 1px solid black; padding: 5px; text-align: center;">6</div><div style="border: 1px solid black; width: 30px; height: 30px;"></div></div>	14.	<div style="border: 1px solid black; padding: 5px; text-align: center;">10</div> <div style="display: flex; justify-content: space-around; margin-top: 10px;"><div style="border: 1px solid black; padding: 5px; text-align: center;">5</div><div style="border: 1px solid black; width: 30px; height: 30px;"></div></div>	15.	<div style="border: 1px solid black; padding: 5px; text-align: center;">10</div> <div style="display: flex; justify-content: space-around; margin-top: 10px;"><div style="border: 1px solid black; padding: 5px; text-align: center;">4</div><div style="border: 1px solid black; width: 30px; height: 30px;"></div></div>
16.	<div style="border: 1px solid black; padding: 5px; text-align: center;">10</div> <div style="display: flex; justify-content: space-around; margin-top: 10px;"><div style="border: 1px solid black; width: 30px; height: 30px;"></div><div style="border: 1px solid black; padding: 5px; text-align: center;">6</div></div>	17.	<div style="border: 1px solid black; padding: 5px; text-align: center;">10</div> <div style="display: flex; justify-content: space-around; margin-top: 10px;"><div style="border: 1px solid black; width: 30px; height: 30px;"></div><div style="border: 1px solid black; padding: 5px; text-align: center;">4</div></div>	18.	<div style="border: 1px solid black; padding: 5px; text-align: center;">10</div> <div style="display: flex; justify-content: space-around; margin-top: 10px;"><div style="border: 1px solid black; width: 30px; height: 30px;"></div><div style="border: 1px solid black; padding: 5px; text-align: center;">3</div></div>	19.	<div style="border: 1px solid black; padding: 5px; text-align: center;">10</div> <div style="display: flex; justify-content: space-around; margin-top: 10px;"><div style="border: 1px solid black; width: 30px; height: 30px;"></div><div style="border: 1px solid black; padding: 5px; text-align: center;">4</div></div>	20.	<div style="border: 1px solid black; padding: 5px; text-align: center;">10</div> <div style="display: flex; justify-content: space-around; margin-top: 10px;"><div style="border: 1px solid black; width: 30px; height: 30px;"></div><div style="border: 1px solid black; padding: 5px; text-align: center;">3</div></div>
21.	<div style="border: 1px solid black; padding: 5px; text-align: center;">10</div> <div style="display: flex; justify-content: space-around; margin-top: 10px;"><div style="border: 1px solid black; padding: 5px; text-align: center;">0</div><div style="border: 1px solid black; width: 30px; height: 30px;"></div></div>	22.	<div style="border: 1px solid black; padding: 5px; text-align: center;">10</div> <div style="display: flex; justify-content: space-around; margin-top: 10px;"><div style="border: 1px solid black; padding: 5px; text-align: center;">1</div><div style="border: 1px solid black; width: 30px; height: 30px;"></div></div>	23.	<div style="border: 1px solid black; padding: 5px; text-align: center;">10</div> <div style="display: flex; justify-content: space-around; margin-top: 10px;"><div style="border: 1px solid black; padding: 5px; text-align: center;">2</div><div style="border: 1px solid black; width: 30px; height: 30px;"></div></div>	24.	<div style="border: 1px solid black; padding: 5px; text-align: center;">10</div> <div style="display: flex; justify-content: space-around; margin-top: 10px;"><div style="border: 1px solid black; padding: 5px; text-align: center;">4</div><div style="border: 1px solid black; width: 30px; height: 30px;"></div></div>	25.	<div style="border: 1px solid black; padding: 5px; text-align: center;">10</div> <div style="display: flex; justify-content: space-around; margin-top: 10px;"><div style="border: 1px solid black; padding: 5px; text-align: center;">2</div><div style="border: 1px solid black; width: 30px; height: 30px;"></div></div>

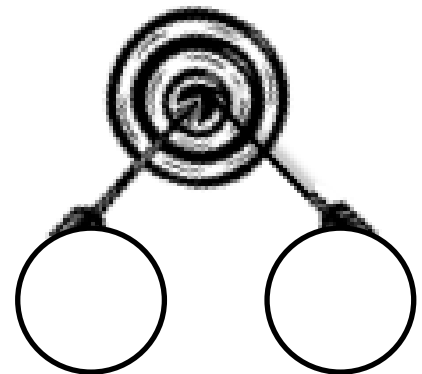
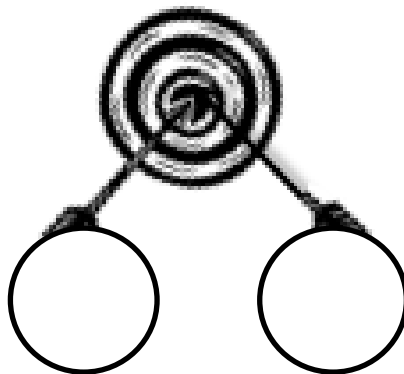
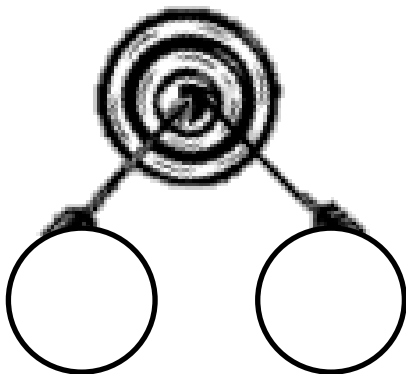
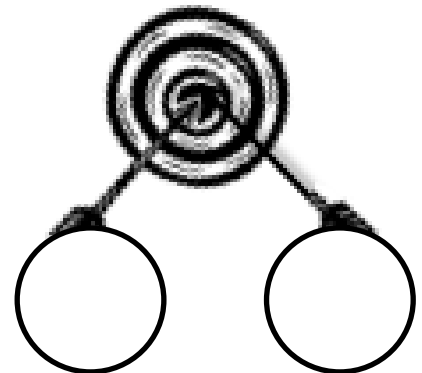
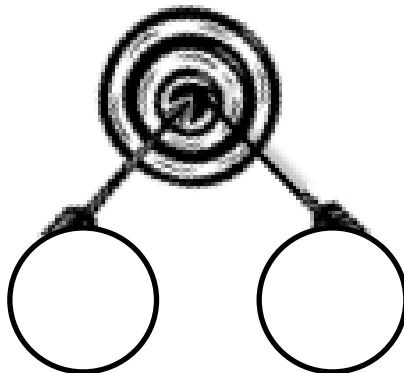
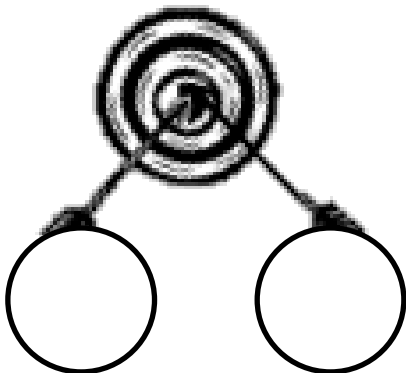
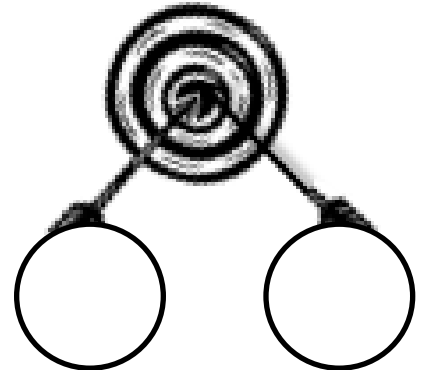
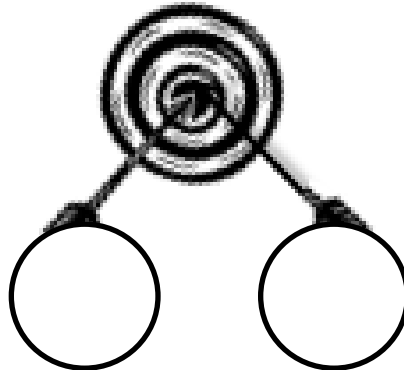
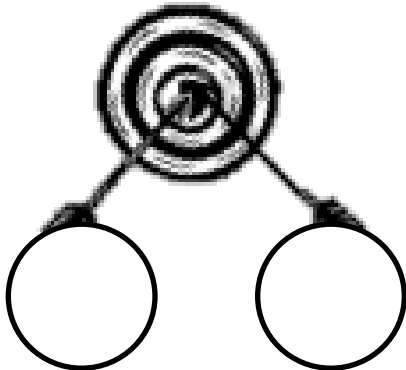
© Kelly Spinks

Target Number:

# Target Practice




**Directions:** Choose a *target number* between 6 and 10 and write it in the middle of the circle on the top of the page. Roll a die. Write the number rolled in the circle at the end one of the arrows. Then, make a bull's-eye by writing the number needed to make your target in the other circle.



A

Number correct:



Name \_\_\_\_\_


Date \_\_\_\_\_

\*Count on to add.

1	1 + 1 ●      ●		16	4 + 3 ● ● ●	
2	2 + 1 ● ●    ●		17	5 + 3 ● ● ●	
3	3 + 1 ● ● ●   ●		18	7 + 3 ● ● ●	
4	3 + 2 ● ● ●   ● ●		19	7 + 2 ● ●	
5	1 + 2 ●      ● ●		20	8 + 2 ● ●	
6	2 + 2 ● ●    ● ●		21	6 + 2 ● ●	
7	2 + 3 ● ●    ● ● ●		22	6 + 1 ●	
8	2 + 1 ●		23	6 + 1	
9	2 + 2 ● ●		24	6 + 2	
10	3 + 2 ● ●		25	7 + 2	
11	5 + 2 ● ●		26	8 + 2	
12	8 + 2 ● ●		27	2 + 8	
13	8 + 1 ●		28	2 + 6	
14	7 + 1 ●		29	3 + 6	
15	9 + 1 ●		30	4 + 5	

B

Number correct:




Name \_\_\_\_\_

Date \_\_\_\_\_

\*Count and write the number.

1	1 + 1 ● ●		16	4 + 2 ● ●	
2	2 + 2 ● ● ● ●		17	3 + 2 ● ●	
3	3 + 2 ● ● ● ● ●		18	5 + 2 ● ●	
4	2 + 2 ● ● ● ●		19	7 + 2 ● ●	
5	2 + 1 ● ● ●		20	7 + 3 ● ● ●	
6	3 + 1 ● ● ● ●		21	6 + 3 ● ● ●	
7	3 + 2 ● ● ● ● ●		22	6 + 2 ● ●	
8	3 + 2 ● ●		23	6 + 2	
9	2 + 2 ● ●		24	5 + 2	
10	4 + 2 ● ●		25	7 + 2	
11	1 + 2 ● ●		26	6 + 2	
12	2 + 1 ●		27	2 + 6	
13	3 + 1 ●		28	2 + 7	
14	5 + 1 ●		29	3 + 7	
15	7 + 1 ●		30	4 + 7	

Number correct:



A


Name \_\_\_\_\_

Date \_\_\_\_\_

\*Count On to Add

1	$1 + 1$		16	$4 + 3$	
2	$2 + 1$		17	$3 + 3$	
3	$3 + 1$		18	$4 + 3$	
4	$3 + 2$		19	$3 + 4$	
5	$2 + 2$		20	$2 + 4$	
6	$3 + 2$		21	$4 + 2$	
7	$2 + 2$		22	$5 + 2$	
8	$3 + 0$		23	$2 + 5$	
9	$3 + 1$		24	$2 + 6$	
10	$3 + 2$		25	$6 + 3$	
11	$5 + 2$		26	$3 + 6$	
12	$5 + 3$		27	$2 + 7$	
13	$5 + 2$		28	$3 + 7$	
14	$5 + 3$		29	$2 + 8$	
15	$6 + 3$		30	$3 + 6$	

Number correct:

**B**

Name \_\_\_\_\_


Date \_\_\_\_\_

\*Count On to Add.

1	$2 + 1$		16	$4 + 3$	
2	$1 + 1$		17	$3 + 3$	
3	$2 + 1$		18	$2 + 3$	
4	$2 + 2$		19	$1 + 3$	
5	$3 + 2$		20	$0 + 3$	
6	$2 + 2$		21	$1 + 3$	
7	$3 + 2$		22	$2 + 5$	
8	$3 + 1$		23	$5 + 2$	
9	$5 + 1$		24	$2 + 6$	
10	$6 + 1$		25	$6 + 2$	
11	$6 + 2$		26	$3 + 6$	
12	$5 + 2$		27	$3 + 7$	
13	$6 + 2$		28	$2 + 7$	
14	$6 + 3$		29	$2 + 6$	
15	$5 + 3$		30	$3 + 6$	

A

Number correct:



Name \_\_\_\_\_


Date \_\_\_\_\_

\*Write the number that is 1 less

1	5		16	10	
2	4		17	8	
3	3		18	11	
4	5		19	10	
5	3		20	9	
6	1		21	1	
7	4		22	11	
8	5		23	21	
9	7		24	4	
10	6		25	14	
11	7		26	24	
12	9		27	10	
13	8		28	20	
14	9		29	21	
15	10		30	31	

**B**

Number correct:



Name \_\_\_\_\_

Date \_\_\_\_\_

\*Write the number that is 1 less.

1	3		16	10	
2	2		17	9	
3	1		18	11	
4	6		19	9	
5	4		20	13	
6	2		21	11	
7	1		22	1	
8	3		23	11	
9	5		24	21	
10	7		25	5	
11	10		26	15	
12	9		27	25	
13	8		28	20	
14	6		29	10	
15	17		30	21	

Name \_\_\_\_\_

Date \_\_\_\_\_

**A**

# Correct \_\_\_\_\_

Add.

1	$3 + 1 =$		23	$1 + 2 =$	
2	$4 + 1 =$		24	$3 + 6 =$	
3	$5 + 1 =$		25	$1 + 8 =$	
4	$9 + 1 =$		26	$2 + 3 =$	
5	$6 + 1 =$		27	$1 + 4 =$	
6	$8 + 1 =$		28	$2 + 4 =$	
7	$2 + 1 =$		29	$1 + 3 =$	
8	$7 + 1 =$		30	$1 + 5 =$	
9	$1 + 7 =$		31	$3 + 3 =$	
10	$1 + 9 =$		32	$4 + 3 =$	
11	$1 + 6 =$		33	$5 + 3 =$	
12	$2 + 2 =$		34	$6 + 3 =$	
13	$3 + 2 =$		35	$7 + 3 =$	
14	$4 + 2 =$		36	$3 + 7 =$	
15	$8 + 2 =$		37	$3 + 4 =$	
16	$5 + 2 =$		38	$3 + 5 =$	
17	$6 + 2 =$		39	$4 + 4 =$	
18	$7 + 2 =$		40	$5 + 4 =$	
19	$2 + 7 =$		41	$6 + 4 =$	
20	$2 + 8 =$		42	$4 + 6 =$	
21	$2 + 5 =$		43	$4 + 5 =$	
22	$2 + 6 =$		44	$5 + 5 =$	

© Bill Davidson

Name \_\_\_\_\_

Date \_\_\_\_\_

**B**

Improvement \_\_\_\_\_

# Correct \_\_\_\_\_


Add.

1	$2 + 1 =$		23	$1 + 8 =$	
2	$3 + 1 =$		24	$3 + 7 =$	
3	$4 + 1 =$		25	$1 + 5 =$	
4	$8 + 1 =$		26	$2 + 4 =$	
5	$5 + 1 =$		27	$1 + 4 =$	
6	$7 + 1 =$		28	$2 + 3 =$	
7	$9 + 1 =$		29	$1 + 3 =$	
8	$6 + 1 =$		30	$1 + 2 =$	
9	$1 + 6 =$		31	$3 + 3 =$	
10	$1 + 9 =$		32	$4 + 3 =$	
11	$1 + 7 =$		33	$5 + 3 =$	
12	$2 + 2 =$		34	$7 + 3 =$	
13	$3 + 2 =$		35	$6 + 3 =$	
14	$4 + 2 =$		36	$3 + 6 =$	
15	$7 + 2 =$		37	$3 + 5 =$	
16	$5 + 2 =$		38	$3 + 4 =$	
17	$8 + 2 =$		39	$4 + 4 =$	
18	$6 + 2 =$		40	$5 + 4 =$	
19	$2 + 6 =$		41	$6 + 4 =$	
20	$2 + 8 =$		42	$4 + 6 =$	
21	$2 + 5 =$		43	$4 + 5 =$	
22	$2 + 7 =$		44	$5 + 5 =$	

© Bill Davidson

A

Number correct:



Name \_\_\_\_\_


Date \_\_\_\_\_

\*Write the missing number from each subtraction sentence. Pay attention to the = sign.

1	$2 - 1 = \square$		16	$\square = 10 - 0$	
2	$1 - 1 = \square$		17	$\square = 10 - 1$	
3	$1 - 0 = \square$		18	$\square = 9 - 1$	
4	$3 - 1 = \square$		19	$\square = 7 - 1$	
5	$3 - 0 = \square$		20	$\square = 6 - 1$	
6	$4 - 0 = \square$		21	$\square = 6 - 0$	
7	$4 - 1 = \square$		22	$\square = 8 - 0$	
8	$5 - 1 = \square$		23	$8 - \square = 8$	
9	$6 - 1 = \square$		24	$\square - 0 = 8$	
10	$6 - 0 = \square$		25	$7 - \square = 6$	
11	$8 - 0 = \square$		26	$7 = 7 - \square$	
12	$10 - 0 = \square$		27	$9 = 9 - \square$	
13	$9 - 0 = \square$		28	$\square - 1 = 7$	
14	$9 - 1 = \square$		29	$\square - 0 = 8$	
15	$10 - 1 = \square$		30	$9 = \square - 1$	

**B**

Number correct:




Name \_\_\_\_\_

Date \_\_\_\_\_

\*Write the missing number from each subtraction sentence. Pay attention to the = sign.

1	$3 - 1 = \square$		16	$\square = 10 - 1$	
2	$2 - 1 = \square$		17	$\square = 9 - 1$	
3	$1 - 1 = \square$		18	$\square = 7 - 1$	
4	$1 - 0 = \square$		19	$\square = 7 - 0$	
5	$2 - 0 = \square$		20	$\square = 8 - 0$	
6	$4 - 0 = \square$		21	$\square = 10 - 0$	
7	$5 - 1 = \square$		22	$\square = 9 - 1$	
8	$7 - 1 = \square$		23	$9 - \square = 8$	
9	$8 - 1 = \square$		24	$\square - 1 = 8$	
10	$9 - 0 = \square$		25	$7 - \square = 6$	
11	$10 - 0 = \square$		26	$6 = 7 - \square$	
12	$7 - 0 = \square$		27	$9 = 9 - \square$	
13	$8 - 0 = \square$		28	$\square - 0 = 9$	
14	$10 - 1 = \square$		29	$\square - 0 = 10$	
15	$9 - 1 = \square$		30	$8 = \square - 1$	

Number correct:



A

Name \_\_\_\_\_


Date \_\_\_\_\_

Write the missing number from each subtraction sentence. Pay attention to the = sign.

1	$2 - 2 = \square$		16	$0 = 10 - \square$	
2	$1 - 1 = \square$		17	$0 = 9 - \square$	
3	$1 - 0 = \square$		18	$0 = 8 - \square$	
4	$3 - 3 = \square$		19	$0 = 6 - \square$	
5	$3 - 2 = \square$		20	$1 = 6 - \square$	
6	$4 - 4 = \square$		21	$1 = 7 - \square$	
7	$4 - 3 = \square$		22	$1 = 10 - \square$	
8	$6 - 6 = \square$		23	$10 - \square = 1$	
9	$7 - 7 = \square$		24	$\square - 9 = 1$	
10	$8 - 8 = \square$		25	$7 - \square = 0$	
11	$8 - 7 = \square$		26	$0 = 7 - \square$	
12	$9 - 9 = \square$		27	$0 = 9 - \square$	
13	$9 - 8 = \square$		28	$\square - 8 = 0$	
14	$10 - 10 = \square$		29	$\square - 7 = 1$	
15	$10 - 9 = \square$		30	$1 = \square - 5$	

**B**

Number correct:



Name \_\_\_\_\_


Date \_\_\_\_\_

Write the missing number from each subtraction sentence. Pay attention to the = sign.

1	$3 - 3 = \square$		16	$0 = 6 - \square$	
2	$2 - 2 = \square$		17	$0 = 7 - \square$	
3	$1 - 1 = \square$		18	$0 = 8 - \square$	
4	$1 - 0 = \square$		19	$0 = 10 - \square$	
5	$2 - 1 = \square$		20	$1 = 10 - \square$	
6	$4 - 3 = \square$		21	$1 = 9 - \square$	
7	$5 - 4 = \square$		22	$1 = 7 - \square$	
8	$7 - 7 = \square$		23	$7 - \square = 1$	
9	$8 - 8 = \square$		24	$\square - 6 = 1$	
10	$9 - 9 = \square$		25	$6 - \square = 0$	
11	$10 - 10 = \square$		26	$0 = 6 - \square$	
12	$10 - 9 = \square$		27	$0 = 8 - \square$	
13	$8 - 7 = \square$		28	$\square - 8 = 0$	
14	$6 - 5 = \square$		29	$\square - 6 = 1$	
15	$6 - 6 = \square$		30	$1 = \square - 6$	

A

Number correct:



Name \_\_\_\_\_


Date \_\_\_\_\_

\*Write the missing number from each subtraction sentence. Pay attention to the + and - signs.

1	$9 + 1 = \square$		16	$10 - 7 = \square$	
2	$1 + 9 = \square$		17	$10 = 7 + \square$	
3	$10 - 1 = \square$		18	$10 = 3 + \square$	
4	$10 - 9 = \square$		19	$10 = 6 + \square$	
5	$10 + 0 = \square$		20	$10 = 4 + \square$	
6	$0 + 10 = \square$		21	$10 = 5 + \square$	
7	$10 - 0 = \square$		22	$10 - \square = 5$	
8	$10 - 10 = \square$		23	$5 = 10 - \square$	
9	$8 + 2 = \square$		24	$6 = 10 - \square$	
10	$2 + 8 = \square$		25	$7 = 10 - \square$	
11	$10 - 2 = \square$		26	$7 = \square - 3$	
12	$10 - 8 = \square$		27	$4 = 10 - \square$	
13	$7 + 3 = \square$		28	$5 = \square - 5$	
14	$3 + 7 = \square$		29	$6 = 10 - \square$	
15	$10 - 3 = \square$		30	$7 = \square - 3$	

## B

Number correct:



Name \_\_\_\_\_


Date \_\_\_\_\_

\*Write the missing number from each number sentence. Pay attention to the + and - signs.

1	$8 + 2 = \square$		16	$10 - 6 = \square$	
2	$2 + 8 = \square$		17	$10 = 8 + \square$	
3	$10 - 2 = \square$		18	$10 = 7 + \square$	
4	$10 - 8 = \square$		19	$10 = 3 + \square$	
5	$9 + 1 = \square$		20	$10 = 4 + \square$	
6	$1 + 9 = \square$		21	$10 = 5 + \square$	
7	$10 - 1 = \square$		22	$10 - \square = 5$	
8	$10 - 9 = \square$		23	$6 = 10 - \square$	
9	$10 + 0 = \square$		24	$7 = 10 - \square$	
10	$0 + 10 = \square$		25	$8 = 10 - \square$	
11	$10 - 0 = \square$		26	$7 = \square - 3$	
12	$10 - 10 = \square$		27	$2 = 10 - \square$	
13	$6 + 4 = \square$		28	$4 = \square - 6$	
14	$4 + 6 = \square$		29	$3 = 10 - \square$	
15	$10 - 4 = \square$		30	$7 = \square - 3$	

A

Number correct:



Name \_\_\_\_\_

Date \_\_\_\_\_

\*Write the missing number from each sentence.

1	8 and 2 make <input type="text"/>		16	11 is 10 and <input type="text"/>	
2	9 and 1 make <input type="text"/>		17	11 is 1 and <input type="text"/>	
3	7 and 3 make <input type="text"/>		18	12 is 2 and <input type="text"/>	
4	6 and <input type="text"/> make 10		19	11 is <input type="text"/> and 1	
5	4 and <input type="text"/> make 10		20	14 is 10 and <input type="text"/>	
6	5 and <input type="text"/> make 10		21	15 is <input type="text"/> and 5	
7	<input type="text"/> and 5 make 10		22	18 is 10 and <input type="text"/>	
8	13 is 10 and <input type="text"/>		23	20 is 10 and <input type="text"/>	
9	14 is 10 and <input type="text"/>		24	2 more than 10 is <input type="text"/>	
10	16 is 10 and <input type="text"/>		25	10 more than 2 is <input type="text"/>	
11	17 is 10 and <input type="text"/>		26	10 is <input type="text"/> less than 12	
12	19 is 10 and <input type="text"/>		27	10 is <input type="text"/> less than 12	
13	18 is 10 and <input type="text"/>		28	8 less than 18 is <input type="text"/>	
14	12 is 10 and <input type="text"/>		29	6 less than 16 is <input type="text"/>	
15	13 is 10 and <input type="text"/>		30	10 less than 20 is <input type="text"/>	


## B

Name \_\_\_\_\_

Date \_\_\_\_\_

\*Write the missing number from each sentence.


Number correct:



1	9 and 1 make <input type="text"/>		16	12 is 10 and <input type="text"/>	
2	8 and 2 make <input type="text"/>		17	12 is 2 and <input type="text"/>	
3	6 and 4 make <input type="text"/>		18	11 is 1 and <input type="text"/>	
4	7 and <input type="text"/> make 10		19	11 is <input type="text"/> and 1	
5	3 and <input type="text"/> make 10		20	15 is 10 and <input type="text"/>	
6	7 and <input type="text"/> make 10		21	14 is <input type="text"/> and 4	
7	<input type="text"/> and 5 make 10		22	19 is 10 and <input type="text"/>	
8	14 is 10 and <input type="text"/>		23	20 is 10 and <input type="text"/>	
9	13 is 10 and <input type="text"/>		24	1 more than 10 is <input type="text"/>	
10	17 is 10 and <input type="text"/>		25	10 more than 1 is <input type="text"/>	
11	16 is 10 and <input type="text"/>		26	10 is <input type="text"/> less than 11	
12	15 is 10 and <input type="text"/>		27	10 is <input type="text"/> less than 11	
13	19 is 10 and <input type="text"/>		28	7 less than 18 is <input type="text"/>	
14	11 is 10 and <input type="text"/>		29	7 less than 16 is <input type="text"/>	
15	12 is 10 and <input type="text"/>		30	10 less than 20 is <input type="text"/>	

A

Number correct:



Name \_\_\_\_\_


Date \_\_\_\_\_

\*Make a ten to add.

1	$9 + 1 + 3 = \square$		16	$6 + 4 + 5 = \square$	
2	$9 + 1 + 5 = \square$		17	$6 + 4 + 6 = \square$	
3	$1 + 9 + 5 = \square$		18	$4 + 6 + 6 = \square$	
4	$1 + 9 + 1 = \square$		19	$4 + 6 + 5 = \square$	
5	$5 + 5 + 4 = \square$		20	$4 + 5 + 6 = \square$	
6	$5 + 5 + 6 = \square$		21	$5 + 3 + 5 = \square$	
7	$5 + 5 + 5 = \square$		22	$6 + 5 + 5 = \square$	
8	$8 + 2 + 1 = \square$		23	$1 + 4 + 9 = \square$	
9	$8 + 2 + 3 = \square$		24	$9 + 1 + \square = 14$	
10	$8 + 2 + 7 = \square$		25	$8 + 2 + \square = 11$	
11	$2 + 8 + 7 = \square$		26	$\square + 3 + 4 = 13$	
12	$7 + 3 + 3 = \square$		27	$2 + \square + 6 = 16$	
13	$7 + 3 + 6 = \square$		28	$1 + 1 + \square = 11$	
14	$7 + 3 + 7 = \square$		29	$19 = 5 + \square + 9$	
15	$3 + 7 + 7 = \square$		30	$18 = 2 + \square + 6$	

**B**

Number correct:



Name \_\_\_\_\_


Date \_\_\_\_\_

\*Make a ten to add.

1	$5 + 5 + 4 = \square$		16	$6 + 4 + 2 = \square$	
2	$5 + 5 + 6 = \square$		17	$6 + 4 + 3 = \square$	
3	$5 + 5 + 5 = \square$		18	$4 + 6 + 3 = \square$	
4	$9 + 1 + 1 = \square$		19	$4 + 6 + 6 = \square$	
5	$9 + 1 + 2 = \square$		20	$4 + 7 + 6 = \square$	
6	$9 + 1 + 5 = \square$		21	$5 + 4 + 5 = \square$	
7	$1 + 9 + 5 = \square$		22	$8 + 5 + 5 = \square$	
8	$1 + 9 + 6 = \square$		23	$1 + 7 + 9 = \square$	
9	$8 + 2 + 4 = \square$		24	$9 + 1 + \square = 11$	
10	$8 + 2 + 7 = \square$		25	$8 + 2 + \square = 12$	
11	$2 + 8 + 7 = \square$		26	$\square + 3 + 4 = 14$	
12	$7 + 3 + 7 = \square$		27	$3 + \square + 7 = 20$	
13	$7 + 3 + 8 = \square$		28	$7 + 8 + \square = 17$	
14	$7 + 3 + 9 = \square$		29	$16 = 3 + \square + 6$	
15	$3 + 7 + 9 = \square$		30	$19 = 2 + \square + 7$	

A

Number correct:



Name \_\_\_\_\_


Date \_\_\_\_\_

\*Write the missing number.

1	$9 + 1 = \square$		16	$9 + 5 = \square$	
2	$10 + 1 = \square$		17	$9 + 6 = \square$	
3	$9 + 2 = \square$		18	$6 + 9 = \square$	
4	$9 + 1 = \square$		19	$9 + 4 = \square$	
5	$10 + 2 = \square$		20	$4 + 9 = \square$	
6	$9 + 3 = \square$		21	$9 + 8 = \square$	
7	$9 + 1 = \square$		22	$9 + 9 = \square$	
8	$10 + 4 = \square$		23	$9 + \square = 18$	
9	$9 + 5 = \square$		24	$\square + 6 = 15$	
10	$9 + 1 = \square$		25	$\square + 6 = 16$	
11	$10 + 6 = \square$		26	$13 = 9 + \square$	
12	$9 + 7 = \square$		27	$17 = 8 + \square$	
13	$9 + 1 = \square$		28	$10 + 2 = 9 + \square$	
14	$10 + 8 = \square$		29	$9 + 5 = 10 + \square$	
15	$9 + 9 = \square$		30	$\square + 7 = 8 + 9$	

**B**

Number correct:



Name \_\_\_\_\_


Date \_\_\_\_\_

\*Write the missing number.

1	$9 + 1 = \square$		16	$5 + 9 = \square$	
2	$10 + 2 = \square$		17	$6 + 9 = \square$	
3	$9 + 3 = \square$		18	$9 + 6 = \square$	
4	$9 + 1 = \square$		19	$9 + 7 = \square$	
5	$10 + 1 = \square$		20	$7 + 9 = \square$	
6	$9 + 2 = \square$		21	$9 + 8 = \square$	
7	$9 + 1 = \square$		22	$9 + 9 = \square$	
8	$10 + 3 = \square$		23	$9 + \square = 17$	
9	$9 + 4 = \square$		24	$\square + 5 = 14$	
10	$9 + 1 = \square$		25	$\square + 4 = 14$	
11	$10 + 5 = \square$		26	$15 = 9 + \square$	
12	$9 + 6 = \square$		27	$16 = 7 + \square$	
13	$9 + 1 = \square$		28	$10 + 4 = 9 + \square$	
14	$10 + 4 = \square$		29	$9 + 6 = 10 + \square$	
15	$9 + 5 = \square$		30	$\square + 6 = 7 + 9$	

A

Number correct:



Name \_\_\_\_\_


Date \_\_\_\_\_

\*Write the missing number.

1	$9 + 2 = \square$		16	$4 + 8 = \square$	
2	$9 + 3 = \square$		17	$8 + 4 = \square$	
3	$9 + 5 = \square$		18	$7 + 4 = \square$	
4	$9 + 4 = \square$		19	$7 + 5 = \square$	
5	$8 + 2 = \square$		20	$7 + 6 = \square$	
6	$8 + 3 = \square$		21	$6 + 7 = \square$	
7	$8 + 5 = \square$		22	$9 + 9 = \square$	
8	$8 + 4 = \square$		23	$9 + \square = 18$	
9	$9 + 4 = \square$		24	$\square + 4 = 13$	
10	$8 + 5 = \square$		25	$\square + 4 = 12$	
11	$9 + 5 = \square$		26	$12 = 3 + \square$	
12	$8 + 6 = \square$		27	$16 = 8 + \square$	
13	$9 + 6 = \square$		28	$9 + 4 = 8 + \square$	
14	$6 + 9 = \square$		29	$9 + 3 = 5 + \square$	
15	$9 + 6 = \square$		30	$\square + 7 = 8 + 6$	

**B**

Number correct:



Name \_\_\_\_\_


Date \_\_\_\_\_

\*Write the missing number.

1	$9 + 1 = \square$		16	$3 + 8 = \square$	
2	$9 + 2 = \square$		17	$8 + 3 = \square$	
3	$9 + 4 = \square$		18	$7 + 3 = \square$	
4	$9 + 3 = \square$		19	$7 + 4 = \square$	
5	$8 + 2 = \square$		20	$7 + 5 = \square$	
6	$8 + 3 = \square$		21	$5 + 7 = \square$	
7	$8 + 5 = \square$		22	$8 + 8 = \square$	
8	$8 + 4 = \square$		23	$8 + \square = 16$	
9	$9 + 4 = \square$		24	$\square + 3 = 12$	
10	$8 + 5 = \square$		25	$\square + 4 = 12$	
11	$9 + 5 = \square$		26	$12 = 3 + \square$	
12	$8 + 7 = \square$		27	$14 = 7 + \square$	
13	$9 + 7 = \square$		28	$9 + 3 = 8 + \square$	
14	$7 + 9 = \square$		29	$9 + 3 = 5 + \square$	
15	$9 + 7 = \square$		30	$\square + 7 = 8 + 5$	

A

Number correct:



Name \_\_\_\_\_


Date \_\_\_\_\_

\*Write the missing number.

1	$10 - 9 = \square$		16	$10 - \square = 5$	
2	$10 - 8 = \square$		17	$9 - \square = 5$	
3	$10 - 6 = \square$		18	$8 - \square = 5$	
4	$10 - 7 = \square$		19	$10 - \square = 3$	
5	$10 - 6 = \square$		20	$9 - \square = 3$	
6	$10 - 5 = \square$		21	$8 - \square = 3$	
7	$10 - 6 = \square$		22	$\square - 6 = 4$	
8	$10 - 4 = \square$		23	$\square - 6 = 3$	
9	$10 - 3 = \square$		24	$\square - 6 = 2$	
10	$10 - 7 = \square$		25	$10 - 4 = 9 - \square$	
11	$10 - 8 = \square$		26	$8 - 2 = 10 - \square$	
12	$10 - 2 = \square$		27	$8 - \square = 10 - 3$	
13	$10 - 1 = \square$		28	$9 - \square = 10 - 3$	
14	$10 - 9 = \square$		29	$10 - 4 = 9 - \square$	
15	$10 - 10 = \square$		30	$\square - 2 = 10 - 4$	

**B**

Number correct:



Name \_\_\_\_\_


Date \_\_\_\_\_

\*Write the missing number.

1	$10 - 8 = \square$		16	$10 - \square = 0$	
2	$10 - 9 = \square$		17	$9 - \square = 0$	
3	$10 - 8 = \square$		18	$8 - \square = 0$	
4	$10 - 9 = \square$		19	$10 - \square = 1$	
5	$10 - 7 = \square$		20	$9 - \square = 1$	
6	$10 - 9 = \square$		21	$8 - \square = 1$	
7	$10 - 8 = \square$		22	$\square - 5 = 5$	
8	$10 - 7 = \square$		23	$\square - 5 = 4$	
9	$10 - 3 = \square$		24	$\square - 5 = 3$	
10	$10 - 7 = \square$		25	$10 - 8 = 9 - \square$	
11	$10 - 6 = \square$		26	$8 - 6 = 10 - \square$	
12	$10 - 4 = \square$		27	$8 - \square = 10 - 2$	
13	$10 - 3 = \square$		28	$9 - \square = 10 - 2$	
14	$10 - 7 = \square$		29	$10 - 3 = 9 - \square$	
15	$10 - 5 = \square$		30	$\square - 1 = 10 - 3$	

A

Number correct:



Name \_\_\_\_\_


Date \_\_\_\_\_

\*Write the missing number. Pay attention to the addition or subtraction sign.

1	$10 - 9 = \square$		16	$10 - 9 = \square$	
2	$1 + 2 = \square$		17	$11 - 9 = \square$	
3	$10 - 9 = \square$		18	$12 - 9 = \square$	
4	$1 + 3 = \square$		19	$15 - 9 = \square$	
5	$10 - 9 = \square$		20	$14 - 9 = \square$	
6	$1 + 1 = \square$		21	$13 - 9 = \square$	
7	$10 - 9 = \square$		22	$17 - 9 = \square$	
8	$1 + 2 = \square$		23	$18 - 9 = \square$	
9	$12 - 9 = \square$		24	$9 + \square = 13$	
10	$10 - 9 = \square$		25	$9 + \square = 14$	
11	$1 + 3 = \square$		26	$9 + \square = 16$	
12	$13 - 9 = \square$		27	$9 + \square = 15$	
13	$10 - 9 = \square$		28	$9 + \square = 17$	
14	$1 + 5 = \square$		29	$9 + \square = 18$	
15	$15 - 9 = \square$		30	$9 + \square = 19$	

**B**

Number correct:



Name \_\_\_\_\_

Date \_\_\_\_\_

\*Write the missing number. Pay attention to the addition or subtraction sign.

1	$10 - 9 = \square$		16	$10 - 9 = \square$	
2	$1 + 1 = \square$		17	$11 - 9 = \square$	
3	$10 - 9 = \square$		18	$13 - 9 = \square$	
4	$1 + 2 = \square$		19	$14 - 9 = \square$	
5	$10 - 9 = \square$		20	$13 - 9 = \square$	
6	$1 + 3 = \square$		21	$12 - 9 = \square$	
7	$10 - 9 = \square$		22	$15 - 9 = \square$	
8	$1 + 4 = \square$		23	$16 - 9 = \square$	
9	$14 - 9 = \square$		24	$9 + \square = 12$	
10	$10 - 9 = \square$		25	$9 + \square = 13$	
11	$1 + 3 = \square$		26	$9 + \square = 15$	
12	$13 - 9 = \square$		27	$9 + \square = 14$	
13	$10 - 9 = \square$		28	$9 + \square = 15$	
14	$1 + 2 = \square$		29	$9 + \square = 17$	
15	$12 - 9 = \square$		30	$9 + \square = 16$	

A

Number correct:



Name \_\_\_\_\_

Date \_\_\_\_\_

\*Write the missing number. Pay attention to the addition or subtraction sign.

1	$10 - 8 = \square$		16	$10 - 8 = \square$	
2	$2 + 2 = \square$		17	$11 - 8 = \square$	
3	$10 - 8 = \square$		18	$12 - 8 = \square$	
4	$2 + 3 = \square$		19	$15 - 8 = \square$	
5	$10 - 8 = \square$		20	$14 - 8 = \square$	
6	$2 + 4 = \square$		21	$13 - 8 = \square$	
7	$10 - 8 = \square$		22	$17 - 8 = \square$	
8	$2 + 1 = \square$		23	$18 - 8 = \square$	
9	$11 - 8 = \square$		24	$8 + \square = 11$	
10	$10 - 8 = \square$		25	$8 + \square = 12$	
11	$2 + 2 = \square$		26	$8 + \square = 15$	
12	$12 - 8 = \square$		27	$8 + \square = 14$	
13	$10 - 8 = \square$		28	$8 + \square = 16$	
14	$2 + 5 = \square$		29	$8 + \square = 17$	
15	$15 - 8 = \square$		30	$8 + \square = 18$	

**B**

Number correct:



Name \_\_\_\_\_


Date \_\_\_\_\_

\*Write the missing number. Pay attention to the addition or subtraction sign.

1	$10 - 8 = \square$		16	$10 - 8 = \square$	
2	$2 + 1 = \square$		17	$11 - 8 = \square$	
3	$10 - 8 = \square$		18	$13 - 8 = \square$	
4	$2 + 2 = \square$		19	$14 - 8 = \square$	
5	$10 - 8 = \square$		20	$13 - 8 = \square$	
6	$2 + 3 = \square$		21	$12 - 8 = \square$	
7	$10 - 8 = \square$		22	$15 - 8 = \square$	
8	$2 + 2 = \square$		23	$16 - 8 = \square$	
9	$12 - 8 = \square$		24	$8 + \square = 10$	
10	$10 - 8 = \square$		25	$8 + \square = 11$	
11	$2 + 3 = \square$		26	$8 + \square = 13$	
12	$13 - 8 = \square$		27	$8 + \square = 12$	
13	$10 - 8 = \square$		28	$8 + \square = 13$	
14	$2 + 2 = \square$		29	$8 + \square = 15$	
15	$12 - 8 = \square$		30	$8 + \square = 16$	

A

Number correct:



Name \_\_\_\_\_


Date \_\_\_\_\_

\*Write the missing number.

1	$10 - 9 = \square$		16	$12 - 7 = \square$	
2	$11 - 9 = \square$		17	$13 - 7 = \square$	
3	$13 - 9 = \square$		18	$14 - 7 = \square$	
4	$10 - 8 = \square$		19	$15 - 9 = \square$	
5	$11 - 8 = \square$		20	$15 - 8 = \square$	
6	$13 - 8 = \square$		21	$15 - 7 = \square$	
7	$10 - 7 = \square$		22	$17 - 7 = \square$	
8	$11 - 7 = \square$		23	$16 - 7 = \square$	
9	$13 - 7 = \square$		24	$17 - 7 = \square$	
10	$12 - 9 = \square$		25	$16 - \square = 9$	
11	$13 - 9 = \square$		26	$16 - \square = 8$	
12	$14 - 9 = \square$		27	$17 - \square = 8$	
13	$12 - 8 = \square$		28	$17 - \square = 9$	
14	$13 - 8 = \square$		29	$17 - \square = 16 - 8$	
15	$14 - 8 = \square$		30	$\square - 7 = 17 - 8$	

**B**

Number correct:



Name \_\_\_\_\_


Date \_\_\_\_\_

\*Write the missing number.

1	$10 - 9 = \square$		16	$11 - 7 = \square$	
2	$11 - 9 = \square$		17	$12 - 7 = \square$	
3	$12 - 9 = \square$		18	$15 - 7 = \square$	
4	$10 - 8 = \square$		19	$15 - 9 = \square$	
5	$11 - 8 = \square$		20	$15 - 8 = \square$	
6	$12 - 8 = \square$		21	$15 - 7 = \square$	
7	$10 - 7 = \square$		22	$15 - 8 = \square$	
8	$11 - 7 = \square$		23	$16 - 8 = \square$	
9	$12 - 7 = \square$		24	$16 - 7 = \square$	
10	$11 - 9 = \square$		25	$16 - \square = 9$	
11	$12 - 9 = \square$		26	$16 - \square = 8$	
12	$15 - 9 = \square$		27	$16 - \square = 7$	
13	$11 - 8 = \square$		28	$16 - \square = 9$	
14	$12 - 8 = \square$		29	$16 - \square = 15 - 8$	
15	$15 - 8 = \square$		30	$\square - 8 = 15 - 7$	

A

Number correct:



Name \_\_\_\_\_


Date \_\_\_\_\_

\*Write the missing number.

1	$2 + \square = 3$		16	$2 + \square = 8$	
2	$1 + \square = 3$		17	$4 + \square = 8$	
3	$\square + 1 = 3$		18	$8 = \square + 6$	
4	$\square + 2 = 4$		19	$8 = 3 + \square$	
5	$3 + \square = 4$		20	$\square + 3 = 9$	
6	$1 + \square = 4$		21	$2 + \square = 9$	
7	$1 + \square = 5$		22	$9 = \square + 1$	
8	$4 + \square = 5$		23	$9 = 4 + \square$	
9	$3 + \square = 5$		24	$2 + 2 + \square = 9$	
10	$3 + \square = 6$		25	$2 + 2 + \square = 8$	
11	$\square + 2 = 6$		26	$3 + \square + 3 = 9$	
12	$0 + \square = 6$		27	$3 + \square + 2 = 9$	
13	$1 + \square = 7$		28	$5 + 3 = \square + 4$	
14	$\square + 5 = 7$		29	$\square + 4 = 1 + 5$	
15	$\square + 4 = 7$		30	$3 + \square = 2 + 6$	

**B**

Number correct:



Name \_\_\_\_\_


Date \_\_\_\_\_

Write the missing number.

1	$1 + \square = 3$		16	$3 + \square = 8$	
2	$0 + \square = 3$		17	$2 + \square = 8$	
3	$\square + 3 = 3$		18	$8 = \square + 1$	
4	$\square + 2 = 4$		19	$8 = 4 + \square$	
5	$3 + \square = 4$		20	$\square + 2 = 9$	
6	$4 + \square = 4$		21	$4 + \square = 9$	
7	$4 + \square = 5$		22	$9 = \square + 5$	
8	$1 + \square = 5$		23	$9 = 6 + \square$	
9	$2 + \square = 5$		24	$1 + 5 + \square = 9$	
10	$4 + \square = 6$		25	$3 + 2 + \square = 8$	
11	$\square + 2 = 6$		26	$2 + \square + 6 = 9$	
12	$3 + \square = 6$		27	$3 + \square + 4 = 9$	
13	$3 + \square = 7$		28	$5 + 4 = \square + 6$	
14	$\square + 4 = 7$		29	$\square + 3 = 6 + 2$	
15	$\square + 5 = 7$		30	$4 + \square = 2 + 7$	

A

Number correct:



Name \_\_\_\_\_


Date \_\_\_\_\_

\*Write the missing number.

1	$2 + \square = 3$		16	$2 + \square = 8$	
2	$1 + \square = 3$		17	$4 + \square = 8$	
3	$\square + 1 = 3$		18	$8 = \square + 6$	
4	$\square + 2 = 4$		19	$8 = 3 + \square$	
5	$3 + \square = 4$		20	$\square + 3 = 9$	
6	$1 + \square = 4$		21	$2 + \square = 9$	
7	$1 + \square = 5$		22	$9 = \square + 1$	
8	$4 + \square = 5$		23	$9 = 4 + \square$	
9	$3 + \square = 5$		24	$2 + 2 + \square = 9$	
10	$3 + \square = 6$		25	$2 + 2 + \square = 8$	
11	$\square + 2 = 6$		26	$3 + \square + 3 = 9$	
12	$0 + \square = 6$		27	$3 + \square + 2 = 9$	
13	$1 + \square = 7$		28	$5 + 3 = \square + 4$	
14	$\square + 5 = 7$		29	$\square + 4 = 1 + 5$	
15	$\square + 4 = 7$		30	$3 + \square = 2 + 6$	

**B**

Number correct:



Name \_\_\_\_\_


Date \_\_\_\_\_

\*Write the missing number.

1	$1 + \square = 3$		16	$3 + \square = 8$	
2	$0 + \square = 3$		17	$2 + \square = 8$	
3	$\square + 3 = 3$		18	$8 = \square + 1$	
4	$\square + 2 = 4$		19	$8 = 4 + \square$	
5	$3 + \square = 4$		20	$\square + 2 = 9$	
6	$4 + \square = 4$		21	$4 + \square = 9$	
7	$4 + \square = 5$		22	$9 = \square + 5$	
8	$1 + \square = 5$		23	$9 = 6 + \square$	
9	$2 + \square = 5$		24	$1 + 5 + \square = 9$	
10	$4 + \square = 6$		25	$3 + 2 + \square = 8$	
11	$\square + 2 = 6$		26	$2 + \square + 6 = 9$	
12	$3 + \square = 6$		27	$3 + \square + 4 = 9$	
13	$3 + \square = 7$		28	$5 + 4 = \square + 6$	
14	$\square + 4 = 7$		29	$\square + 3 = 6 + 2$	
15	$\square + 5 = 7$		30	$4 + \square = 2 + 7$	

A

Number correct:



Name \_\_\_\_\_


Date \_\_\_\_\_

\*Write the missing number.

1	$2 - \square = 1$		16	$6 - \square = 2$	
2	$2 - \square = 2$		17	$6 - \square = 3$	
3	$2 - \square = 0$		18	$6 - \square = 4$	
4	$3 - \square = 2$		19	$7 - \square = 3$	
5	$3 - \square = 1$		20	$7 - \square = 2$	
6	$3 - \square = 0$		21	$7 - \square = 1$	
7	$3 - \square = 3$		22	$8 - \square = 2$	
8	$4 - \square = 4$		23	$8 - \square = 3$	
9	$4 - \square = 3$		24	$4 = 8 - \square$	
10	$4 - \square = 2$		25	$2 = 9 - \square$	
11	$4 - \square = 1$		26	$3 = 9 - \square$	
12	$5 - \square = 0$		27	$4 = 9 - \square$	
13	$5 - \square = 1$		28	$10 - 3 = 9 - \square$	
14	$5 - \square = 2$		29	$9 - \square = 10 - 5$	
15	$5 - \square = 3$		30	$9 - \square = 10 - 6$	

**B**

Number correct:



Name \_\_\_\_\_


Date \_\_\_\_\_

\*Write the missing number.

1	$2 - \square = 2$		16	$6 - \square = 3$	
2	$2 - \square = 1$		17	$6 - \square = 4$	
3	$2 - \square = 0$		18	$6 - \square = 5$	
4	$3 - \square = 3$		19	$7 - \square = 4$	
5	$3 - \square = 2$		20	$7 - \square = 3$	
6	$3 - \square = 1$		21	$7 - \square = 2$	
7	$3 - \square = 0$		22	$8 - \square = 3$	
8	$4 - \square = 4$		23	$8 - \square = 4$	
9	$4 - \square = 3$		24	$5 = 8 - \square$	
10	$4 - \square = 2$		25	$3 = 9 - \square$	
11	$4 - \square = 1$		26	$4 = 9 - \square$	
12	$5 - \square = 5$		27	$5 = 9 - \square$	
13	$5 - \square = 4$		28	$10 - 4 = 9 - \square$	
14	$5 - \square = 3$		29	$9 - \square = 10 - 6$	
15	$5 - \square = 2$		30	$9 - \square = 10 - 5$	

A

Number correct:



Name \_\_\_\_\_


Date \_\_\_\_\_

\*Write the missing number.

1	$\square = 4 + 1$		16	$7 + 3 = 4 + \square$	
2	$\square = 4 + 2$		17	$6 + 4 = 5 + \square$	
3	$\square = 4 + 3$		18	$5 + 5 = 6 + \square$	
4	$\square = 5 + 1$		19	$5 + 3 = \square + 1$	
5	$\square = 5 + 2$		20	$5 + 4 = \square + 5$	
6	$\square = 5 + 3$		21	$4 + 5 = \square + 5$	
7	$\square = 6 + 1$		22	$2 + \square = 6 + 2$	
8	$8 = 7 + \square$		23	$4 + \square = 5 + 3$	
9	$9 = 8 + \square$		24	$\square + 4 = 5 + 2$	
10	$9 = \square + 1$		25	$\square + 6 = 4 + 3$	
11	$9 = \square + 9$		26	$4 + 2 = 1 + \square$	
12	$8 = \square + 1$		27	$3 + 4 = \square + 2$	
13	$\square = 7 + 1$		28	$4 + 4 = 2 + \square$	
14	$10 = 8 + \square$		29	$3 + \square = 2 + 7$	
15	$10 = \square + 8$		30	$\square + 2 = 2 + 6$	

**B**

Number correct:



Name \_\_\_\_\_


Date \_\_\_\_\_

\*Write the missing number.

1	$\square = 3 + 1$		16	$5 + 5 = 4 + \square$	
2	$\square = 3 + 2$		17	$6 + 4 = 7 + \square$	
3	$\square = 3 + 3$		18	$3 + 7 = 8 + \square$	
4	$\square = 4 + 1$		19	$5 + 2 = \square + 1$	
5	$\square = 4 + 2$		20	$5 + 3 = \square + 5$	
6	$\square = 4 + 3$		21	$4 + 4 = \square + 4$	
7	$\square = 5 + 1$		22	$3 + \square = 6 + 3$	
8	$8 = 1 + \square$		23	$4 + \square = 5 + 4$	
9	$9 = 1 + \square$		24	$\square + 4 = 2 + 5$	
10	$8 = \square + 7$		25	$\square + 6 = 3 + 4$	
11	$8 = \square + 8$		26	$4 + 3 = 1 + \square$	
12	$7 = \square + 1$		27	$4 + 4 = \square + 2$	
13	$\square = 6 + 1$		28	$4 + 5 = 2 + \square$	
14	$10 = 9 + \square$		29	$3 + \square = 2 + 6$	
15	$10 = \square + 9$		30	$\square + 2 = 2 + 7$	



Number correct:



Name \_\_\_\_\_


Date \_\_\_\_\_

\*Write the missing number.

1	$10 + 3 = \square$		16	$10 + \square = 11$	
2	$10 + 2 = \square$		17	$10 + \square = 12$	
3	$10 + 1 = \square$		18	$5 + \square = 15$	
4	$1 + 10 = \square$		19	$4 + \square = 14$	
5	$4 + 10 = \square$		20	$\square + 10 = 17$	
6	$6 + 10 = \square$		21	$17 - \square = 7$	
7	$10 + 7 = \square$		22	$16 - \square = 6$	
8	$8 + 10 = \square$		23	$18 - \square = 8$	
9	$12 - 10 = \square$		24	$\square - 10 = 8$	
10	$11 - 10 = \square$		25	$\square - 10 = 9$	
11	$10 - 10 = \square$		26	$1 + 1 + 10 = \square$	
12	$13 - 10 = \square$		27	$2 + 2 + 10 = \square$	
13	$14 - 10 = \square$		28	$2 + 3 + 10 = \square$	
14	$15 - 10 = \square$		29	$4 + \square + 3 = 17$	
15	$18 - 10 = \square$		30	$\square + 5 + 10 = 18$	

**B**

Number correct:



Name \_\_\_\_\_


Date \_\_\_\_\_

\*Write the missing number.

1	$10 + 1 = \square$		16	$10 + \square = 10$	
2	$10 + 2 = \square$		17	$10 + \square = 11$	
3	$10 + 3 = \square$		18	$2 + \square = 12$	
4	$4 + 10 = \square$		19	$3 + \square = 13$	
5	$5 + 10 = \square$		20	$\square + 10 = 13$	
6	$6 + 10 = \square$		21	$13 - \square = 3$	
7	$10 + 8 = \square$		22	$14 - \square = 4$	
8	$8 + 10 = \square$		23	$16 - \square = 6$	
9	$10 - 10 = \square$		24	$\square - 10 = 6$	
10	$11 - 10 = \square$		25	$\square - 10 = 8$	
11	$12 - 10 = \square$		26	$2 + 1 + 10 = \square$	
12	$13 - 10 = \square$		27	$3 + 2 + 10 = \square$	
13	$15 - 10 = \square$		28	$2 + 3 + 10 = \square$	
14	$17 - 10 = \square$		29	$4 + \square + 4 = 18$	
15	$19 - 10 = \square$		30	$\square + 6 + 10 = 19$	

A

Number correct:



Name \_\_\_\_\_


Date \_\_\_\_\_

\*Write the missing number.

1	$10 + 2 = \square$		16	$12 + 3 = \square$	
2	$2 + 1 = \square$		17	$13 + 3 = \square$	
3	$10 + 3 = \square$		18	$14 + 3 = \square$	
4	$4 + 10 = \square$		19	$13 + 5 = \square$	
5	$4 + 2 = \square$		20	$14 + 5 = \square$	
6	$6 + 10 = \square$		21	$15 + 5 = \square$	
7	$10 + 3 = \square$		22	$4 + 14 = \square$	
8	$3 + 3 = \square$		23	$4 + 15 = \square$	
9	$10 + 6 = \square$		24	$12 + \square = 14$	
10	$2 + 1 = \square$		25	$12 + \square = 15$	
11	$12 + 1 = \square$		26	$12 + \square = 16$	
12	$2 + 2 = \square$		27	$\square + 4 = 16$	
13	$12 + 2 = \square$		28	$5 + \square = 16$	
14	$3 + 3 = \square$		29	$5 + \square = 26$	
15	$13 + 3 = \square$		30	$5 + \square = 26$	

**B**

Number correct:



Name \_\_\_\_\_


Date \_\_\_\_\_

\*Write the missing number.

1	$10 + 1 = \square$		16	$12 + 2 = \square$	
2	$1 + 1 = \square$		17	$13 + 2 = \square$	
3	$10 + 2 = \square$		18	$14 + 2 = \square$	
4	$3 + 10 = \square$		19	$13 + 4 = \square$	
5	$3 + 2 = \square$		20	$14 + 4 = \square$	
6	$5 + 10 = \square$		21	$15 + 4 = \square$	
7	$10 + 2 = \square$		22	$5 + 14 = \square$	
8	$2 + 2 = \square$		23	$5 + 15 = \square$	
9	$10 + 4 = \square$		24	$11 + \square = 12$	
10	$2 + 1 = \square$		25	$11 + \square = 13$	
11	$12 + 1 = \square$		26	$11 + \square = 14$	
12	$1 + 1 = \square$		27	$\square + 3 = 14$	
13	$11 + 1 = \square$		28	$6 + \square = 19$	
14	$3 + 2 = \square$		29	$6 + \square = 29$	
15	$13 + 2 = \square$		30	$5 + \square = 39$	

A

Number correct:



Name \_\_\_\_\_


Date \_\_\_\_\_

\*Write the missing number.

1	$3 - 3 = \square$		16	$13 - 1 = \square$	
2	$13 - 3 = \square$		17	$13 - 2 = \square$	
3	$3 - 2 = \square$		18	$14 - 3 = \square$	
4	$13 - 2 = \square$		19	$14 - 4 = \square$	
5	$4 - 2 = \square$		20	$14 - 10 = \square$	
6	$14 - 2 = \square$		21	$17 - 5 = \square$	
7	$4 - 3 = \square$		22	$17 - 6 = \square$	
8	$14 - 3 = \square$		23	$17 - 10 = \square$	
9	$14 - 10 = \square$		24	$8 - \square = 5$	
10	$7 - 6 = \square$		25	$18 - \square = 15$	
11	$17 - 6 = \square$		26	$18 - \square = 13$	
12	$17 - 10 = \square$		27	$19 - \square = 12$	
13	$6 - 3 = \square$		28	$\square - 2 = 17$	
14	$16 - 3 = \square$		29	$17 - 3 = 16 - \square$	
15	$16 - 10 = \square$		30	$19 - 6 = \square - 5$	

**B**

Number correct:



Name \_\_\_\_\_


Date \_\_\_\_\_

\*Write the missing number.

1	$2 - 2 = \square$		16	$14 - 1 = \square$	
2	$12 - 2 = \square$		17	$14 - 2 = \square$	
3	$2 - 1 = \square$		18	$15 - 3 = \square$	
4	$12 - 1 = \square$		19	$15 - 4 = \square$	
5	$3 - 3 = \square$		20	$15 - 10 = \square$	
6	$13 - 3 = \square$		21	$18 - 5 = \square$	
7	$3 - 2 = \square$		22	$18 - 6 = \square$	
8	$13 - 2 = \square$		23	$18 - 10 = \square$	
9	$13 - 10 = \square$		24	$7 - \square = 5$	
10	$6 - 5 = \square$		25	$17 - \square = 15$	
11	$16 - 5 = \square$		26	$17 - \square = 13$	
12	$16 - 10 = \square$		27	$19 - \square = 13$	
13	$4 - 2 = \square$		28	$\square - 3 = 16$	
14	$14 - 2 = \square$		29	$17 - 4 = 16 - \square$	
15	$14 - 10 = \square$		30	$19 - 7 = \square - 6$	

A

Number correct:



Name \_\_\_\_\_


Date \_\_\_\_\_

\*Write the missing number. Pay attention to the + and - signs.

1	$5 + 2 = \square$		16	$13 + 6 = \square$	
2	$15 + 2 = \square$		17	$3 + 16 = \square$	
3	$2 + 5 = \square$		18	$19 - 2 = \square$	
4	$12 + 5 = \square$		19	$19 - 7 = \square$	
5	$7 - 2 = \square$		20	$4 + 15 = \square$	
6	$17 - 2 = \square$		21	$14 + 5 = \square$	
7	$7 - 5 = \square$		22	$18 - 6 = \square$	
8	$17 - 5 = \square$		23	$18 - 2 = \square$	
9	$4 + 3 = \square$		24	$13 + \square = 19$	
10	$14 + 3 = \square$		25	$\square - 6 = 13$	
11	$3 + 4 = \square$		26	$14 + \square = 19$	
12	$13 + 4 = \square$		27	$\square - 4 = 15$	
13	$7 - 4 = \square$		28	$\square - 5 = 14$	
14	$17 - 4 = \square$		29	$13 + 4 = 19 - \square$	
15	$17 - 3 = \square$		30	$18 - 6 = \square + 3$	

**B**

Number correct:



Name \_\_\_\_\_


Date \_\_\_\_\_

\*Write the missing number. Pay attention to the + and - signs.

1	$5 + 1 = \square$		16	$12 + 7 = \square$	
2	$15 + 1 = \square$		17	$2 + 17 = \square$	
3	$1 + 5 = \square$		18	$18 - 2 = \square$	
4	$11 + 5 = \square$		19	$18 - 6 = \square$	
5	$6 - 1 = \square$		20	$3 + 16 = \square$	
6	$16 - 1 = \square$		21	$13 + 6 = \square$	
7	$6 - 5 = \square$		22	$17 - 4 = \square$	
8	$16 - 5 = \square$		23	$17 - 3 = \square$	
9	$4 + 5 = \square$		24	$12 + \square = 18$	
10	$14 + 5 = \square$		25	$\square - 6 = 12$	
11	$5 + 4 = \square$		26	$13 + \square = 19$	
12	$15 + 4 = \square$		27	$\square - 3 = 16$	
13	$9 - 4 = \square$		28	$\square - 3 = 17$	
14	$19 - 4 = \square$		29	$11 + 6 = 19 - \square$	
15	$19 - 5 = \square$		30	$19 - 5 = \square + 3$	

A

Number correct:



Name \_\_\_\_\_


Date \_\_\_\_\_

\*Write the missing number.

1	$17 - 1 = \square$		16	$19 - 9 = \square$	
2	$15 - 1 = \square$		17	$18 - 9 = \square$	
3	$19 - 1 = \square$		18	$11 - 9 = \square$	
4	$15 - 2 = \square$		19	$16 - 5 = \square$	
5	$17 - 2 = \square$		20	$15 - 5 = \square$	
6	$18 - 2 = \square$		21	$14 - 5 = \square$	
7	$18 - 3 = \square$		22	$12 - 5 = \square$	
8	$18 - 5 = \square$		23	$12 - 6 = \square$	
9	$17 - 5 = \square$		24	$14 - \square = 11$	
10	$19 - 5 = \square$		25	$14 - \square = 10$	
11	$17 - 7 = \square$		26	$14 - \square = 9$	
12	$18 - 7 = \square$		27	$15 - \square = 9$	
13	$19 - 7 = \square$		28	$\square - 7 = 9$	
14	$19 - 2 = \square$		29	$19 - 5 = 16 - \square$	
15	$19 - 7 = \square$		30	$15 - 8 = \square - 9$	

**B**

Number correct:



Name \_\_\_\_\_


Date \_\_\_\_\_

\*Write the missing number.

1	$16 - 1 = \square$		16	$19 - 9 = \square$	
2	$14 - 1 = \square$		17	$18 - 9 = \square$	
3	$18 - 1 = \square$		18	$12 - 9 = \square$	
4	$19 - 2 = \square$		19	$19 - 8 = \square$	
5	$17 - 2 = \square$		20	$18 - 8 = \square$	
6	$15 - 2 = \square$		21	$17 - 8 = \square$	
7	$15 - 3 = \square$		22	$14 - 5 = \square$	
8	$17 - 5 = \square$		23	$13 - 5 = \square$	
9	$19 - 5 = \square$		24	$12 - \square = 7$	
10	$16 - 5 = \square$		25	$16 - \square = 10$	
11	$16 - 6 = \square$		26	$16 - \square = 9$	
12	$19 - 6 = \square$		27	$17 - \square = 9$	
13	$17 - 6 = \square$		28	$\square - 7 = 9$	
14	$17 - 1 = \square$		29	$19 - 4 = 17 - \square$	
15	$17 - 6 = \square$		30	$16 - 8 = \square - 9$	

A

Number correct:



Name \_\_\_\_\_

Date \_\_\_\_\_

\*Write the missing number.

1	$17 + 1 = \square$		16	$11 + 9 = \square$	
2	$15 + 1 = \square$		17	$10 + 9 = \square$	
3	$18 + 1 = \square$		18	$9 + 9 = \square$	
4	$15 + 2 = \square$		19	$7 + 9 = \square$	
5	$17 + 2 = \square$		20	$8 + 8 = \square$	
6	$18 + 2 = \square$		21	$7 + 8 = \square$	
7	$15 + 3 = \square$		22	$8 + 5 = \square$	
8	$5 + 13 = \square$		23	$11 + 8 = \square$	
9	$15 + 2 = \square$		24	$12 + \square = 17$	
10	$5 + 12 = \square$		25	$14 + \square = 17$	
11	$12 + 4 = \square$		26	$8 + \square = 17$	
12	$13 + 4 = \square$		27	$\square + 7 = 16$	
13	$3 + 14 = \square$		28	$\square + 7 = 15$	
14	$17 + 2 = \square$		29	$9 + 5 = 10 + \square$	
15	$12 + 7 = \square$		30	$7 + 8 = \square + 9$	

**B**

Number correct:



Name \_\_\_\_\_


Date \_\_\_\_\_

\*Write the missing number.

1	$14 + 1 = \square$		16	$11 + 9 = \square$	
2	$16 + 1 = \square$		17	$10 + 9 = \square$	
3	$17 + 1 = \square$		18	$8 + 9 = \square$	
4	$11 + 2 = \square$		19	$9 + 9 = \square$	
5	$15 + 2 = \square$		20	$9 + 8 = \square$	
6	$17 + 2 = \square$		21	$8 + 8 = \square$	
7	$15 + 4 = \square$		22	$8 + 5 = \square$	
8	$4 + 15 = \square$		23	$11 + 7 = \square$	
9	$15 + 3 = \square$		24	$12 + \square = 18$	
10	$5 + 13 = \square$		25	$14 + \square = 18$	
11	$13 + 4 = \square$		26	$8 + \square = 18$	
12	$14 + 4 = \square$		27	$\square + 5 = 14$	
13	$4 + 14 = \square$		28	$\square + 6 = 15$	
14	$16 + 3 = \square$		29	$9 + 6 = 10 + \square$	
15	$13 + 6 = \square$		30	$6 + 7 = \square + 9$	

A

Number correct:



Name \_\_\_\_\_

Date \_\_\_\_\_

\*Write the missing number.

1	$17 + 1 = \square$		16	$11 + 9 = \square$	
2	$15 + 1 = \square$		17	$10 + 9 = \square$	
3	$18 + 1 = \square$		18	$9 + 9 = \square$	
4	$15 + 2 = \square$		19	$7 + 9 = \square$	
5	$17 + 2 = \square$		20	$8 + 8 = \square$	
6	$18 + 2 = \square$		21	$7 + 8 = \square$	
7	$15 + 3 = \square$		22	$8 + 5 = \square$	
8	$5 + 13 = \square$		23	$11 + 8 = \square$	
9	$15 + 2 = \square$		24	$12 + \square = 17$	
10	$5 + 12 = \square$		25	$14 + \square = 17$	
11	$12 + 4 = \square$		26	$8 + \square = 17$	
12	$13 + 4 = \square$		27	$\square + 7 = 16$	
13	$3 + 14 = \square$		28	$\square + 7 = 15$	
14	$17 + 2 = \square$		29	$9 + 5 = 10 + \square$	
15	$12 + 7 = \square$		30	$7 + 8 = \square + 9$	

**B**

Number correct:



Name \_\_\_\_\_


Date \_\_\_\_\_

\*Write the missing number.

1	$14 + 1 = \square$		16	$11 + 9 = \square$	
2	$16 + 1 = \square$		17	$10 + 9 = \square$	
3	$17 + 1 = \square$		18	$8 + 9 = \square$	
4	$11 + 2 = \square$		19	$9 + 9 = \square$	
5	$15 + 2 = \square$		20	$9 + 8 = \square$	
6	$17 + 2 = \square$		21	$8 + 8 = \square$	
7	$15 + 4 = \square$		22	$8 + 5 = \square$	
8	$4 + 15 = \square$		23	$11 + 7 = \square$	
9	$15 + 3 = \square$		24	$12 + \square = 18$	
10	$5 + 13 = \square$		25	$14 + \square = 18$	
11	$13 + 4 = \square$		26	$8 + \square = 18$	
12	$14 + 4 = \square$		27	$\square + 5 = 14$	
13	$4 + 14 = \square$		28	$\square + 6 = 15$	
14	$16 + 3 = \square$		29	$9 + 6 = 10 + \square$	
15	$13 + 6 = \square$		30	$6 + 7 = \square + 9$	

A

Number correct:



Name \_\_\_\_\_


Date \_\_\_\_\_

\*Write the missing number.

1	$17 - 1 = \square$		16	$19 - 9 = \square$	
2	$15 - 1 = \square$		17	$18 - 9 = \square$	
3	$19 - 1 = \square$		18	$11 - 9 = \square$	
4	$15 - 2 = \square$		19	$16 - 5 = \square$	
5	$17 - 2 = \square$		20	$15 - 5 = \square$	
6	$18 - 2 = \square$		21	$14 - 5 = \square$	
7	$18 - 3 = \square$		22	$12 - 5 = \square$	
8	$18 - 5 = \square$		23	$12 - 6 = \square$	
9	$17 - 5 = \square$		24	$14 - \square = 11$	
10	$19 - 5 = \square$		25	$14 - \square = 10$	
11	$17 - 7 = \square$		26	$14 - \square = 9$	
12	$18 - 7 = \square$		27	$15 - \square = 9$	
13	$19 - 7 = \square$		28	$\square - 7 = 9$	
14	$19 - 2 = \square$		29	$19 - 5 = 16 - \square$	
15	$19 - 7 = \square$		30	$15 - 8 = \square - 9$	

**B**

Name \_\_\_\_\_

Number correct: 


Date \_\_\_\_\_

\*Write the missing number.

1	$16 - 1 = \square$		16	$19 - 9 = \square$	
2	$14 - 1 = \square$		17	$18 - 9 = \square$	
3	$18 - 1 = \square$		18	$12 - 9 = \square$	
4	$19 - 2 = \square$		19	$19 - 8 = \square$	
5	$17 - 2 = \square$		20	$18 - 8 = \square$	
6	$15 - 2 = \square$		21	$17 - 8 = \square$	
7	$15 - 3 = \square$		22	$14 - 5 = \square$	
8	$17 - 5 = \square$		23	$13 - 5 = \square$	
9	$19 - 5 = \square$		24	$12 - \square = 7$	
10	$16 - 5 = \square$		25	$16 - \square = 10$	
11	$16 - 6 = \square$		26	$16 - \square = 9$	
12	$19 - 6 = \square$		27	$17 - \square = 9$	
13	$17 - 6 = \square$		28	$\square - 7 = 9$	
14	$17 - 1 = \square$		29	$19 - 4 = 17 - \square$	
15	$17 - 6 = \square$		30	$16 - 8 = \square - 9$	

A

Number correct:



Name \_\_\_\_\_


Date \_\_\_\_\_

\*Write the missing number.

1	$9 + 1 + 3 = \square$		16	$6 + 3 + 8 = \square$	
2	$9 + 2 + 1 = \square$		17	$5 + 9 + 4 = \square$	
3	$5 + 5 + 3 = \square$		18	$3 + 12 + 4 = \square$	
4	$5 + 2 + 5 = \square$		19	$3 + 11 + 5 = \square$	
5	$4 + 5 + 5 = \square$		20	$5 + 6 + 7 = \square$	
6	$8 + 2 + 4 = \square$		21	$2 + 6 + 3 = \square$	
7	$8 + 3 + 2 = \square$		22	$3 + 2 + 13 = \square$	
8	$12 + 2 + 2 = \square$		23	$3 + 13 + 3 = \square$	
9	$3 + 3 + 12 = \square$		24	$9 + 1 + \square = 14$	
10	$4 + 4 + 5 = \square$		25	$8 + 4 + \square = 16$	
11	$2 + 15 + 2 = \square$		26	$\square + 8 + 6 = 19$	
12	$7 + 3 + 3 = \square$		27	$2 + \square + 7 = 18$	
13	$1 + 17 + 1 = \square$		28	$2 + 2 + \square = 18$	
14	$14 + 2 + 2 = \square$		29	$19 = 6 + \square + 9$	
15	$4 + 12 + 4 = \square$		30	$18 = 7 + \square + 6$	

B

Number correct:













Name \_\_\_\_\_

Date \_\_\_\_\_

\*Write the missing number.


1	$9 + 1 + 2 = \square$		16	$6 + 3 + 9 = \square$	
2	$9 + 4 + 1 = \square$		17	$4 + 9 + 2 = \square$	
3	$5 + 5 + 1 = \square$		18	$2 + 12 + 4 = \square$	
4	$5 + 3 + 5 = \square$		19	$2 + 11 + 5 = \square$	
5	$4 + 5 + 5 = \square$		20	$6 + 6 + 7 = \square$	
6	$8 + 2 + 2 = \square$		21	$2 + 6 + 5 = \square$	
7	$8 + 3 + 2 = \square$		22	$3 + 3 + 13 = \square$	
8	$11 + 1 + 1 = \square$		23	$3 + 14 + 3 = \square$	
9	$2 + 2 + 14 = \square$		24	$9 + 1 + \square = 13$	
10	$4 + 4 + 4 = \square$		25	$8 + 4 + \square = 15$	
11	$2 + 13 + 2 = \square$		26	$\square + 8 + 6 = 18$	
12	$6 + 3 + 3 = \square$		27	$2 + \square + 6 = 18$	
13	$1 + 15 + 1 = \square$		28	$2 + 5 + \square = 18$	
14	$15 + 2 + 2 = \square$		29	$19 = 5 + \square + 9$	
15	$3 + 14 + 3 = \square$		30	$19 = 7 + \square + 6$	

## Break Apart Numbers

5  
5  
5  
6  
6  
6  
6  
7  
7  
7  
7  
8  
8  
8  
8  
8  
9  
9  
9  
9  
9  


A

Number correct:



Name \_\_\_\_\_


Date \_\_\_\_\_

\*Write the missing number.

1	$10 + 3 = \square$		16	$10 + \square = 11$	
2	$10 + 2 = \square$		17	$10 + \square = 12$	
3	$10 + 1 = \square$		18	$5 + \square = 15$	
4	$1 + 10 = \square$		19	$4 + \square = 14$	
5	$4 + 10 = \square$		20	$\square + 10 = 17$	
6	$6 + 10 = \square$		21	$17 - \square = 7$	
7	$10 + 7 = \square$		22	$16 - \square = 6$	
8	$8 + 10 = \square$		23	$18 - \square = 8$	
9	$12 - 10 = \square$		24	$\square - 10 = 8$	
10	$11 - 10 = \square$		25	$\square - 10 = 9$	
11	$10 - 10 = \square$		26	$1 + 1 + 10 = \square$	
12	$13 - 10 = \square$		27	$2 + 2 + 10 = \square$	
13	$14 - 10 = \square$		28	$2 + 3 + 10 = \square$	
14	$15 - 10 = \square$		29	$4 + \square + 3 = 17$	
15	$18 - 10 = \square$		30	$\square + 5 + 10 = 18$	

B

Number correct:



Name \_\_\_\_\_


Date \_\_\_\_\_

\*Write the missing number.

1	$10 + 1 = \square$		16	$10 + \square = 10$	
2	$10 + 2 = \square$		17	$10 + \square = 11$	
3	$10 + 3 = \square$		18	$2 + \square = 12$	
4	$4 + 10 = \square$		19	$3 + \square = 13$	
5	$5 + 10 = \square$		20	$\square + 10 = 13$	
6	$6 + 10 = \square$		21	$13 - \square = 3$	
7	$10 + 8 = \square$		22	$14 - \square = 4$	
8	$8 + 10 = \square$		23	$16 - \square = 6$	
9	$10 - 10 = \square$		24	$\square - 10 = 6$	
10	$11 - 10 = \square$		25	$\square - 10 = 8$	
11	$12 - 10 = \square$		26	$2 + 1 + 10 = \square$	
12	$13 - 10 = \square$		27	$3 + 2 + 10 = \square$	
13	$15 - 10 = \square$		28	$2 + 3 + 10 = \square$	
14	$17 - 10 = \square$		29	$4 + \square + 4 = 18$	
15	$19 - 10 = \square$		30	$\square + 6 + 10 = 19$	

A

Number correct:



Name \_\_\_\_\_


Date \_\_\_\_\_

\*Write the missing number. Pay attention to the addition or subtraction sign.

1	$5 + 1 = \square$		16	$29 + 10 = \square$	
2	$15 + 1 = \square$		17	$9 + 1 = \square$	
3	$25 + 1 = \square$		18	$19 + 1 = \square$	
4	$5 + 10 = \square$		19	$29 + 1 = \square$	
5	$15 + 10 = \square$		20	$39 + 1 = \square$	
6	$25 + 10 = \square$		21	$40 - 1 = \square$	
7	$8 - 1 = \square$		22	$30 - 1 = \square$	
8	$18 - 1 = \square$		23	$20 - 1 = \square$	
9	$28 - 1 = \square$		24	$20 + \square = 21$	
10	$38 - 1 = \square$		25	$20 + \square = 30$	
11	$38 - 10 = \square$		26	$27 + \square = 37$	
12	$28 - 10 = \square$		27	$27 + \square = 28$	
13	$18 - 10 = \square$		28	$\square + 10 = 34$	
14	$9 + 10 = \square$		29	$\square - 10 = 14$	
15	$19 + 10 = \square$		30	$\square - 10 = 24$	

**B**

Number correct:



Name \_\_\_\_\_


Date \_\_\_\_\_

\*Write the missing number. Pay attention to the addition or subtraction sign.

1	$4 + 1 = \square$		16	$28 + 10 = \square$	
2	$14 + 1 = \square$		17	$9 + 1 = \square$	
3	$24 + 1 = \square$		18	$19 + 1 = \square$	
4	$6 + 10 = \square$		19	$29 + 1 = \square$	
5	$16 + 10 = \square$		20	$39 + 1 = \square$	
6	$26 + 10 = \square$		21	$40 - 1 = \square$	
7	$7 - 1 = \square$		22	$30 - 1 = \square$	
8	$17 - 1 = \square$		23	$20 - 1 = \square$	
9	$27 - 1 = \square$		24	$10 + \square = 11$	
10	$37 - 1 = \square$		25	$10 + \square = 20$	
11	$37 - 10 = \square$		26	$22 + \square = 32$	
12	$27 - 10 = \square$		27	$22 + \square = 23$	
13	$17 - 10 = \square$		28	$\square + 10 = 39$	
14	$8 + 10 = \square$		29	$\square - 10 = 19$	
15	$18 + 10 = \square$		30	$\square - 10 = 29$	

A

Number correct:



Name \_\_\_\_\_


Date \_\_\_\_\_

\*Write the missing number in the sequence.

1	0, 1, 2, ____		16	15, ____, 13, 12	
2	10, 11, 12, ____		17	____, 24, 23, 22	
3	20, 21, 22, ____		18	6, 16, ____, 36	
4	10, 9, 8, ____		19	7, ____, 27, 37	
5	20, 19, 18, ____		20	____, 19, 29, 39	
6	40, 39, 38, ____		21	____, 26, 16, 6	
7	0, 10, 20, ____		22	34, ____, 14, 4	
8	2, 12, 22, ____		23	____, 20, 21, 22	
9	5, 15, 25, ____		24	29, ____, 31, 32	
10	40, 30, 20, ____		25	5, ____, 25, 35	
11	39, 29, 19, ____		26	____, 25, 15, 5	
12	7, 8, 9, ____		27	2, 4, ____, 8	
13	7, 8, ____, 10		28	____, 14, 16, 18	
14	17, ____, 19, 20		29	8, ____, 4, 2	
15	15, 14, ____, 12		30	____, 18, 16, 14	

**B**

Number correct:



Name \_\_\_\_\_


Date \_\_\_\_\_

\*Write the missing number in the sequence.

1	1, 2, 3, ____		16	13, ____, 11, 10	
2	11, 12, 13 ____		17	____, 22, 21, 20	
3	21, 22, 23 ____		18	5, 15, ____, 35	
4	10, 9, 8, ____		19	4, ____, 24, 34	
5	20, 19, 18, ____		20	____, 17, 27, 37	
6	30, 29, 28, ____		21	____, 29, 19, 9	
7	0, 10, 20, ____		22	31, ____, 11, 1	
8	3, 13, 23, ____		23	____, 30, 31, 32	
9	6, 16, 26, ____		24	19, ____, 21, 22	
10	40, 30, 20, ____		25	5, ____, 25, 35	
11	38, 28, 18, ____		26	____, 25, 15, 5	
12	6, 7, 8, ____		27	2, 4, ____, 8	
13	6, 7, ____, 9		28	____, 12, 14, 16	
14	16, ____, 18, 19		29	12, ____, 8, 6	
15	16, ____, 14, 13		30	____, 20, 18, 16	

A

Number correct:



Name \_\_\_\_\_


Date \_\_\_\_\_

\*Write the missing number. Pay attention to the + and - signs.

1	$3 + \square = 4$		16	$3 + \square = 7$	
2	$1 + \square = 4$		17	$7 = 4 + \square$	
3	$4 - 1 = \square$		18	$7 - 4 = \square$	
4	$4 - 3 = \square$		19	$7 - 3 = \square$	
5	$3 + \square = 5$		20	$3 + \square = 8$	
6	$2 + \square = 5$		21	$8 = 5 + \square$	
7	$5 - 2 = \square$		22	$\square = 8 - 5$	
8	$5 - 3 = \square$		23	$\square = 8 - 3$	
9	$4 + \square = 6$		24	$3 + \square = 9$	
10	$2 + \square = 6$		25	$9 = 6 + \square$	
11	$6 - 2 = \square$		26	$\square = 9 - 6$	
12	$6 - 4 = \square$		27	$\square = 9 - 3$	
13	$6 - 3 = \square$		28	$9 - 4 = \square + 2$	
14	$3 + \square = 6$		29	$\square + 3 = 9 - 3$	
15	$6 - \square = 3$		30	$\square - 7 = 8 - 6$	

**B**

Number correct:



Name \_\_\_\_\_

Date \_\_\_\_\_

\*Write the missing number. Pay attention to the + and - signs.

1	$4 + \square = 4$		16	$2 + \square = 7$	
2	$0 + \square = 4$		17	$7 = 5 + \square$	
3	$4 - 0 = \square$		18	$7 - 5 = \square$	
4	$4 - 4 = \square$		19	$7 - 2 = \square$	
5	$4 + \square = 5$		20	$2 + \square = 8$	
6	$1 + \square = 5$		21	$8 = 6 + \square$	
7	$5 - 1 = \square$		22	$\square = 8 - 6$	
8	$5 - 4 = \square$		23	$\square = 8 - 2$	
9	$5 + \square = 6$		24	$2 + \square = 9$	
10	$1 + \square = 6$		25	$9 = 7 + \square$	
11	$6 - 1 = \square$		26	$\square = 9 - 7$	
12	$6 - 5 = \square$		27	$\square = 9 - 2$	
13	$2 + \square = 6$		28	$9 - 3 = \square + 3$	
14	$4 + \square = 6$		29	$\square + 2 = 9 - 4$	
15	$6 - 4 = \square$		30	$\square - 6 = 8 - 3$	

Name \_\_\_\_\_

Date \_\_\_\_\_

**Core Addition Fluency Review: Missing Addends**

1.  $5 + \underline{\quad} = 5$

16.  $6 + \underline{\quad} = 7$

31.  $9 + \underline{\quad} = 9$

2.  $4 + \underline{\quad} = 5$

17.  $1 + \underline{\quad} = 7$

32.  $0 + \underline{\quad} = 9$

3.  $2 + \underline{\quad} = 5$

18.  $0 + \underline{\quad} = 7$

33.  $1 + \underline{\quad} = 9$

4.  $3 + \underline{\quad} = 5$

19.  $7 + \underline{\quad} = 7$

34.  $2 + \underline{\quad} = 9$

5.  $0 + \underline{\quad} = 5$

20.  $3 + \underline{\quad} = 7$

35.  $7 + \underline{\quad} = 9$

6.  $1 + \underline{\quad} = 5$

21.  $4 + \underline{\quad} = 7$

36.  $6 + \underline{\quad} = 9$

7.  $1 + \underline{\quad} = 6$

22.  $4 + \underline{\quad} = 8$

37.  $5 + \underline{\quad} = 9$

8.  $0 + \underline{\quad} = 6$

23.  $5 + \underline{\quad} = 8$

38.  $3 + \underline{\quad} = 9$

9.  $6 + \underline{\quad} = 6$

24.  $6 + \underline{\quad} = 8$

39.  $4 + \underline{\quad} = 9$

10.  $5 + \underline{\quad} = 6$

25.  $2 + \underline{\quad} = 8$

40.  $4 + \underline{\quad} = 10$

11.  $3 + \underline{\quad} = 6$

26.  $3 + \underline{\quad} = 8$

41.  $5 + \underline{\quad} = 10$

12.  $4 + \underline{\quad} = 6$

27.  $0 + \underline{\quad} = 8$

42.  $6 + \underline{\quad} = 10$

13.  $2 + \underline{\quad} = 6$

28.  $8 + \underline{\quad} = 8$

43.  $3 + \underline{\quad} = 10$

14.  $2 + \underline{\quad} = 7$

28.  $7 + \underline{\quad} = 8$

44.  $1 + \underline{\quad} = 10$


15.  $5 + \underline{\quad} = 7$

30.  $1 + \underline{\quad} = 8$

45.  $2 + \underline{\quad} = 10$

A

Number correct:



Name \_\_\_\_\_


Date \_\_\_\_\_

\*Write the missing number.

1	$6 + 1 = \square$		16	$6 + 3 = \square$	
2	$16 + 1 = \square$		17	$16 + 3 = \square$	
3	$26 + 1 = \square$		18	$26 + 3 = \square$	
4	$5 + 2 = \square$		19	$4 + 5 = \square$	
5	$15 + 2 = \square$		20	$15 + 4 = \square$	
6	$25 + 2 = \square$		21	$8 + 2 = \square$	
7	$5 + 3 = \square$		22	$18 + 2 = \square$	
8	$15 + 3 = \square$		23	$28 + 2 = \square$	
9	$25 + 3 = \square$		24	$8 + 3 = \square$	
10	$4 + 4 = \square$		25	$8 + 13 = \square$	
11	$14 + 4 = \square$		26	$8 + 23 = \square$	
12	$24 + 4 = \square$		27	$8 + 5 = \square$	
13	$5 + 4 = \square$		28	$8 + 15 = \square$	
14	$15 + 4 = \square$		29	$28 + \square = 33$	
15	$25 + 4 = \square$		30	$25 + \square = 33$	

B

Number correct:



Name \_\_\_\_\_


Date \_\_\_\_\_

\*Write the missing number.

1	$5 + 1 = \square$		16	$6 + 3 = \square$	
2	$15 + 1 = \square$		17	$16 + 3 = \square$	
3	$25 + 1 = \square$		18	$26 + 3 = \square$	
4	$4 + 2 = \square$		19	$3 + 5 = \square$	
5	$14 + 2 = \square$		20	$15 + 3 = \square$	
6	$24 + 2 = \square$		21	$9 + 1 = \square$	
7	$5 + 3 = \square$		22	$19 + 1 = \square$	
8	$15 + 3 = \square$		23	$29 + 1 = \square$	
9	$25 + 3 = \square$		24	$9 + 2 = \square$	
10	$6 + 2 = \square$		25	$9 + 12 = \square$	
11	$16 + 2 = \square$		26	$9 + 22 = \square$	
12	$26 + 2 = \square$		27	$9 + 5 = \square$	
13	$4 + 3 = \square$		28	$9 + 15 = \square$	
14	$14 + 3 = \square$		29	$29 + \square = 34$	
15	$24 + 3 = \square$		30	$25 + \square = 34$	

A

Number correct:



Name \_\_\_\_\_


Date \_\_\_\_\_

\*Write the missing number. Pay attention to the + and - signs.

1	$2 + 2 = \square$		16	$2 + \square = 8$	
2	$2 + \square = 4$		17	$6 + \square = 8$	
3	$4 - 2 = \square$		18	$8 - 6 = \square$	
4	$3 + 3 = \square$		19	$8 - 2 = \square$	
5	$3 + \square = 6$		20	$9 + 2 = \square$	
6	$6 - 3 = \square$		21	$9 + \square = 11$	
7	$4 + \square = 7$		22	$11 - 9 = \square$	
8	$3 + \square = 7$		23	$9 + \square = 15$	
9	$7 - 3 = \square$		24	$15 - 9 = \square$	
10	$7 - 4 = \square$		25	$8 + \square = 15$	
11	$5 + 4 = \square$		26	$15 - \square = 8$	
12	$4 + \square = 9$		27	$8 + \square = 17$	
13	$9 - 4 = \square$		28	$17 - \square = 8$	
14	$9 - 5 = \square$		29	$27 - \square = 8$	
15	$9 - \square = 4$		30	$37 - \square = 8$	

**B**

Number correct:



Name \_\_\_\_\_


Date \_\_\_\_\_

\*Write the missing number. Pay attention to the + and - signs.

1	$3 + 3 = \square$		16	$2 + \square = 9$	
2	$3 + \square = 6$		17	$7 + \square = 9$	
3	$6 - 3 = \square$		18	$9 - 7 = \square$	
4	$4 + 4 = \square$		19	$9 - 2 = \square$	
5	$4 + \square = 8$		20	$9 + 5 = \square$	
6	$8 - 4 = \square$		21	$9 + \square = 14$	
7	$4 + \square = 9$		22	$14 - 9 = \square$	
8	$5 + \square = 9$		23	$9 + \square = 16$	
9	$9 - 5 = \square$		24	$16 - 9 = \square$	
10	$9 - 4 = \square$		25	$8 + \square = 16$	
11	$3 + 4 = \square$		26	$16 - \square = 8$	
12	$4 + \square = 7$		27	$8 + \square = 16$	
13	$7 - 4 = \square$		28	$16 - \square = 8$	
14	$7 - 3 = \square$		29	$26 - \square = 8$	
15	$7 - \square = 3$		30	$36 - \square = 8$	

A

Number correct:



Name \_\_\_\_\_


Date \_\_\_\_\_

\*Write the missing number.

1	$5 + \square = 10$		16	$9 + \square = 10$	
2	$9 + \square = 10$		17	$19 + \square = 20$	
3	$10 + \square = 10$		18	$5 + \square = 10$	
4	$0 + \square = 10$		19	$15 + \square = 20$	
5	$8 + \square = 10$		20	$1 + \square = 10$	
6	$7 + \square = 10$		21	$11 + \square = 20$	
7	$6 + \square = 10$		22	$3 + \square = 10$	
8	$4 + \square = 10$		23	$13 + \square = 20$	
9	$3 + \square = 10$		24	$4 + \square = 10$	
10	$\square + 7 = 10$		25	$14 + \square = 20$	
11	$2 + \square = 10$		26	$16 + \square = 20$	
12	$\square + 8 = 10$		27	$2 + \square = 10$	
13	$1 + \square = 10$		28	$12 + \square = 20$	
14	$\square + 2 = 10$		29	$18 + \square = 20$	
15	$\square + 3 = 10$		30	$11 + \square = 20$	

**B**

Number correct:



Name \_\_\_\_\_


Date \_\_\_\_\_

\*Write the missing number.

1	$10 + \square = 10$		16	$5 + \square = 10$	
2	$0 + \square = 10$		17	$15 + \square = 20$	
3	$9 + \square = 10$		18	$9 + \square = 10$	
4	$5 + \square = 10$		19	$19 + \square = 20$	
5	$6 + \square = 10$		20	$8 + \square = 10$	
6	$7 + \square = 10$		21	$18 + \square = 20$	
7	$8 + \square = 10$		22	$2 + \square = 10$	
8	$2 + \square = 10$		23	$12 + \square = 20$	
9	$3 + \square = 10$		24	$3 + \square = 10$	
10	$\square + 7 = 10$		25	$13 + \square = 20$	
11	$2 + \square = 10$		26	$17 + \square = 20$	
12	$\square + 8 = 10$		27	$4 + \square = 10$	
13	$1 + \square = 10$		28	$16 + \square = 20$	
14	$\square + 9 = 10$		29	$18 + \square = 20$	
15	$\square + 2 = 10$		30	$12 + \square = 40$	

A

Number correct:



Name \_\_\_\_\_

Date \_\_\_\_\_

\*Write the unknown number. Pay attention to the symbols.

1	$4 + 1 = \underline{\quad}$	16	$4 + 3 = \underline{\quad}$
2	$4 + 2 = \underline{\quad}$	17	$\underline{\quad} + 4 = 7$
3	$4 + 3 = \underline{\quad}$	18	$7 = \underline{\quad} + 4$
4	$6 + 1 = \underline{\quad}$	19	$5 + 4 = \underline{\quad}$
5	$6 + 2 = \underline{\quad}$	20	$\underline{\quad} + 5 = 9$
6	$6 + 3 = \underline{\quad}$	21	$9 = \underline{\quad} + 4$
7	$1 + 5 = \underline{\quad}$	22	$2 + 7 = \underline{\quad}$
8	$2 + 5 = \underline{\quad}$	23	$\underline{\quad} + 2 = 9$
9	$3 + 5 = \underline{\quad}$	24	$9 = \underline{\quad} + 7$
10	$5 + \underline{\quad} = 8$	25	$3 + 6 = \underline{\quad}$
11	$8 = 3 + \underline{\quad}$	26	$\underline{\quad} + 3 = 9$
12	$7 + 2 = \underline{\quad}$	27	$9 = \underline{\quad} + 6$
13	$7 + 3 = \underline{\quad}$	28	$4 + 4 = \underline{\quad} + 2$
14	$7 + \underline{\quad} = 10$	29	$5 + 4 = \underline{\quad} + 3$
15	$\underline{\quad} + 7 = 10$	30	$\underline{\quad} + 7 = 3 + 6$

**B**

Number correct:



Name \_\_\_\_\_

Date \_\_\_\_\_

\*Write the unknown number. Pay attention to the symbols.

1	$5 + 1 = \underline{\quad}$	16	$2 + 4 = \underline{\quad}$
2	$5 + 2 = \underline{\quad}$	17	$\underline{\quad} + 4 = 6$
3	$5 + 3 = \underline{\quad}$	18	$6 = \underline{\quad} + 4$
4	$4 + 1 = \underline{\quad}$	19	$3 + 4 = \underline{\quad}$
5	$4 + 2 = \underline{\quad}$	20	$\underline{\quad} + 3 = 7$
6	$4 + 3 = \underline{\quad}$	21	$7 = \underline{\quad} + 4$
7	$1 + 3 = \underline{\quad}$	22	$4 + 5 = \underline{\quad}$
8	$2 + 3 = \underline{\quad}$	23	$\underline{\quad} + 4 = 9$
9	$3 + 3 = \underline{\quad}$	24	$9 = \underline{\quad} + 5$
10	$3 + \underline{\quad} = 6$	25	$2 + 6 = \underline{\quad}$
11	$\underline{\quad} + 3 = 6$	26	$\underline{\quad} + 6 = 9$
12	$5 + 2 = \underline{\quad}$	27	$9 = \underline{\quad} + 2$
13	$5 + 3 = \underline{\quad}$	28	$3 + 3 = \underline{\quad} + 4$
14	$5 + \underline{\quad} = 8$	29	$3 + 4 = \underline{\quad} + 5$
15	$\underline{\quad} + 3 = 8$	30	$\underline{\quad} + 6 = 2 + 7$

A

Number correct:



Name \_\_\_\_\_


Date \_\_\_\_\_

\*Write the unknown number. Pay attention to the equal sign.

1	$5 + 2 = \underline{\quad}$	16	$\underline{\quad} = 5 + 4$
2	$6 + 2 = \underline{\quad}$	17	$\underline{\quad} = 4 + 5$
3	$7 + 2 = \underline{\quad}$	18	$6 + 3 = \underline{\quad}$
4	$4 + 3 = \underline{\quad}$	19	$3 + 6 = \underline{\quad}$
5	$5 + 3 = \underline{\quad}$	20	$\underline{\quad} = 2 + 6$
6	$6 + 3 = \underline{\quad}$	21	$2 + 7 = \underline{\quad}$
7	$\underline{\quad} = 6 + 2$	22	$\underline{\quad} = 3 + 4$
8	$\underline{\quad} = 2 + 6$	23	$3 + 6 = \underline{\quad}$
9	$\underline{\quad} = 7 + 2$	24	$\underline{\quad} = 4 + 5$
10	$\underline{\quad} = 2 + 7$	25	$3 + 4 = \underline{\quad}$
11	$\underline{\quad} = 4 + 3$	26	$13 + 4 = \underline{\quad}$
12	$\underline{\quad} = 3 + 4$	27	$3 + 14 = \underline{\quad}$
13	$\underline{\quad} = 5 + 3$	28	$3 + 6 = \underline{\quad}$
14	$\underline{\quad} = 3 + 5$	29	$13 + \underline{\quad} = 19$
15	$\underline{\quad} = 3 + 4$	30	$19 = \underline{\quad} + 16$

**B**

Number correct:



Name \_\_\_\_\_

Date \_\_\_\_\_

\*Write the unknown number. Pay attention to the equal sign.

1	$4 + 3 = \underline{\quad}$	16	$\underline{\quad} = 6 + 3$
2	$5 + 3 = \underline{\quad}$	17	$\underline{\quad} = 3 + 6$
3	$6 + 3 = \underline{\quad}$	18	$5 + 4 = \underline{\quad}$
4	$6 + 2 = \underline{\quad}$	19	$4 + 5 = \underline{\quad}$
5	$7 + 2 = \underline{\quad}$	20	$\underline{\quad} = 2 + 7$
6	$5 + 4 = \underline{\quad}$	21	$2 + 6 = \underline{\quad}$
7	$\underline{\quad} = 4 + 3$	22	$\underline{\quad} = 3 + 4$
8	$\underline{\quad} = 3 + 4$	23	$4 + 5 = \underline{\quad}$
9	$\underline{\quad} = 5 + 3$	24	$\underline{\quad} = 3 + 6$
10	$\underline{\quad} = 3 + 5$	25	$2 + 7 = \underline{\quad}$
11	$\underline{\quad} = 6 + 2$	26	$12 + 7 = \underline{\quad}$
12	$\underline{\quad} = 2 + 6$	27	$2 + 17 = \underline{\quad}$
13	$\underline{\quad} = 7 + 2$	28	$4 + 5 = \underline{\quad}$
14	$\underline{\quad} = 2 + 7$	29	$14 + \underline{\quad} = 19$
15	$\underline{\quad} = 7 + 2$	30	$19 = \underline{\quad} + 15$

Number correct:



A


Name \_\_\_\_\_

Date \_\_\_\_\_

\*Write the unknown number. Pay attention to the symbols.

1	$6 - 1 = \underline{\quad}$	16	$8 - 2 = \underline{\quad}$
2	$6 - 2 = \underline{\quad}$	17	$8 - 6 = \underline{\quad}$
3	$6 - 3 = \underline{\quad}$	18	$7 - 3 = \underline{\quad}$
4	$10 - 1 = \underline{\quad}$	19	$7 - 4 = \underline{\quad}$
5	$10 - 2 = \underline{\quad}$	20	$8 - 4 = \underline{\quad}$
6	$10 - 3 = \underline{\quad}$	21	$9 - 4 = \underline{\quad}$
7	$7 - 2 = \underline{\quad}$	22	$9 - 5 = \underline{\quad}$
8	$8 - 2 = \underline{\quad}$	23	$9 - 6 = \underline{\quad}$
9	$9 - 2 = \underline{\quad}$	24	$9 - \underline{\quad} = 6$
10	$7 - 3 = \underline{\quad}$	25	$9 - \underline{\quad} = 2$
11	$8 - 3 = \underline{\quad}$	26	$2 = 8 - \underline{\quad}$
12	$10 - 3 = \underline{\quad}$	27	$2 = 9 - \underline{\quad}$
13	$10 - 4 = \underline{\quad}$	28	$10 - 7 = 9 - \underline{\quad}$
14	$9 - 4 = \underline{\quad}$	29	$9 - 5 = \underline{\quad} - 3$
15	$8 - 4 = \underline{\quad}$	30	$\underline{\quad} - 6 = 9 - 7$

Number correct:

**B**

Name \_\_\_\_\_


Date \_\_\_\_\_

\*Write the unknown number. Pay attention to the symbols.

1	$5 - 1 = \underline{\quad}$	16	$6 - 2 = \underline{\quad}$
2	$5 - 2 = \underline{\quad}$	17	$6 - 4 = \underline{\quad}$
3	$5 - 3 = \underline{\quad}$	18	$8 - 3 = \underline{\quad}$
4	$10 - 1 = \underline{\quad}$	19	$8 - 5 = \underline{\quad}$
5	$10 - 2 = \underline{\quad}$	20	$8 - 6 = \underline{\quad}$
6	$10 - 3 = \underline{\quad}$	21	$9 - 3 = \underline{\quad}$
7	$6 - 2 = \underline{\quad}$	22	$9 - 6 = \underline{\quad}$
8	$7 - 2 = \underline{\quad}$	23	$9 - 7 = \underline{\quad}$
9	$8 - 2 = \underline{\quad}$	24	$9 - \underline{\quad} = 5$
10	$6 - 3 = \underline{\quad}$	25	$9 - \underline{\quad} = 4$
11	$7 - 3 = \underline{\quad}$	26	$4 = 8 - \underline{\quad}$
12	$8 - 3 = \underline{\quad}$	27	$4 = 9 - \underline{\quad}$
13	$5 - 4 = \underline{\quad}$	28	$10 - 8 = 9 - \underline{\quad}$
14	$6 - 4 = \underline{\quad}$	29	$8 - 6 = \underline{\quad} - 7$
15	$7 - 4 = \underline{\quad}$	30	$\underline{\quad} - 4 = 9 - 6$

A

Number correct:



Name \_\_\_\_\_


Date \_\_\_\_\_

\*Write the unknown number. Pay attention to the symbols.

1	$2 + 3 = \underline{\quad}$	16	$3 + 3 = \underline{\quad}$
2	$3 + \underline{\quad} = 5$	17	$6 - 3 = \underline{\quad}$
3	$5 - 3 = \underline{\quad}$	18	$6 = \underline{\quad} + 3$
4	$5 - 2 = \underline{\quad}$	19	$2 + 5 = \underline{\quad}$
5	$\underline{\quad} + 2 = 5$	20	$5 + \underline{\quad} = 7$
6	$1 + 5 = \underline{\quad}$	21	$7 - 2 = \underline{\quad}$
7	$1 + \underline{\quad} = 6$	22	$7 - 5 = \underline{\quad}$
8	$6 - 1 = \underline{\quad}$	23	$7 = \underline{\quad} + 5$
9	$6 - 5 = \underline{\quad}$	24	$3 + 4 = \underline{\quad}$
10	$\underline{\quad} + 5 = 6$	25	$4 + \underline{\quad} = 7$
11	$4 + 2 = \underline{\quad}$	26	$7 - 4 = \underline{\quad}$
12	$2 + \underline{\quad} = 6$	27	$7 = \underline{\quad} + 3$
13	$6 - 2 = \underline{\quad}$	28	$3 = 7 - \underline{\quad}$
14	$6 - 4 = \underline{\quad}$	29	$7 - 5 = \underline{\quad} - 4$
15	$\underline{\quad} + 4 = 6$	30	$\underline{\quad} - 3 = 7 - 4$

**B**

Number correct:



Name \_\_\_\_\_


Date \_\_\_\_\_

\*Write the unknown number. Pay attention to the symbols.

1	$1 + 4 = \underline{\quad}$	16	$3 + 3 = \underline{\quad}$
2	$4 + \underline{\quad} = 5$	17	$6 - 3 = \underline{\quad}$
3	$5 - 4 = \underline{\quad}$	18	$6 = \underline{\quad} + 3$
4	$5 - 1 = \underline{\quad}$	19	$2 + 4 = \underline{\quad}$
5	$\underline{\quad} + 1 = 5$	20	$4 + \underline{\quad} = 6$
6	$7 + 2 = \underline{\quad}$	21	$6 - 2 = \underline{\quad}$
7	$5 + \underline{\quad} = 7$	22	$6 - 4 = \underline{\quad}$
8	$7 - 2 = \underline{\quad}$	23	$6 = \underline{\quad} + 4$
9	$7 - 5 = \underline{\quad}$	24	$3 + 4 = \underline{\quad}$
10	$\underline{\quad} + 2 = 7$	25	$4 + \underline{\quad} = 7$
11	$1 + 5 = \underline{\quad}$	26	$7 - 4 = \underline{\quad}$
12	$1 + \underline{\quad} = 6$	27	$7 = \underline{\quad} + 4$
13	$6 - 1 = \underline{\quad}$	28	$4 = 7 - \underline{\quad}$
14	$6 - 5 = \underline{\quad}$	29	$6 - 4 = \underline{\quad} - 5$
15	$\underline{\quad} + 5 = 6$	30	$\underline{\quad} - 4 = 7 - 3$

**A**

Number correct:



Name \_\_\_\_\_

Date \_\_\_\_\_

\*Write the unknown number. Pay attention to the symbols.

1	$5 + 5 = \underline{\quad}$	16	$2 + 6 = \underline{\quad}$
2	$5 + \underline{\quad} = 10$	17	$8 = 6 + \underline{\quad}$
3	$10 - 5 = \underline{\quad}$	18	$8 - 2 = \underline{\quad}$
4	$9 + 1 = \underline{\quad}$	19	$2 + 7 = \underline{\quad}$
5	$1 + \underline{\quad} = 10$	20	$9 = 7 + \underline{\quad}$
6	$10 - 1 = \underline{\quad}$	21	$9 - 7 = \underline{\quad}$
7	$10 - 9 = \underline{\quad}$	22	$8 = \underline{\quad} + 2$
8	$\underline{\quad} + 9 = 10$	23	$8 - 6 = \underline{\quad}$
9	$1 + 8 = \underline{\quad}$	24	$3 + 6 = \underline{\quad}$
10	$8 + \underline{\quad} = 9$	25	$9 = 6 + \underline{\quad}$
11	$9 - 1 = \underline{\quad}$	26	$9 - 6 = \underline{\quad}$
12	$9 - 8 = \underline{\quad}$	27	$9 = \underline{\quad} + 3$
13	$\underline{\quad} + 1 = 9$	28	$3 = 9 - \underline{\quad}$
14	$4 + 4 = \underline{\quad}$	29	$9 - 5 = \underline{\quad} - 6$
15	$8 - 4 = \underline{\quad}$	30	$\underline{\quad} - 7 = 8 - 6$

**B**

Number correct:



Name \_\_\_\_\_


Date \_\_\_\_\_

\*Write the unknown number. Pay attention to the symbols.

1	$9 + 1 = \underline{\quad}$	16	$3 + 5 = \underline{\quad}$
2	$1 + \underline{\quad} = 10$	17	$8 = 5 + \underline{\quad}$
3	$10 - 1 = \underline{\quad}$	18	$8 - 3 = \underline{\quad}$
4	$10 - 9 = \underline{\quad}$	19	$2 + 6 = \underline{\quad}$
5	$\underline{\quad} + 9 = 10$	20	$8 = 6 + \underline{\quad}$
6	$1 + 7 = \underline{\quad}$	21	$8 - 6 = \underline{\quad}$
7	$7 + \underline{\quad} = 8$	22	$2 + 7 = \underline{\quad}$
8	$8 - 1 = \underline{\quad}$	23	$9 = \underline{\quad} + 2$
9	$8 - 7 = \underline{\quad}$	24	$9 - 7 = \underline{\quad}$
10	$\underline{\quad} + 1 = 8$	25	$4 + 5 = \underline{\quad}$
11	$2 + 8 = \underline{\quad}$	26	$9 = 5 + \underline{\quad}$
12	$2 + \underline{\quad} = 10$	27	$9 - 5 = \underline{\quad}$
13	$10 - 2 = \underline{\quad}$	28	$5 = 9 - \underline{\quad}$
14	$10 - 8 = \underline{\quad}$	29	$9 - 6 = \underline{\quad} - 5$
15	$\underline{\quad} + 8 = 10$	30	$\underline{\quad} - 6 = 9 - 7$

A

Number correct:



Name \_\_\_\_\_


Date \_\_\_\_\_

\*Write the missing number. Pay attention to the addition or subtraction sign.

1	$5 + 1 = \square$		16	$29 + 10 = \square$	
2	$15 + 1 = \square$		17	$9 + 1 = \square$	
3	$25 + 1 = \square$		18	$19 + 1 = \square$	
4	$5 + 10 = \square$		19	$29 + 1 = \square$	
5	$15 + 10 = \square$		20	$39 + 1 = \square$	
6	$25 + 10 = \square$		21	$40 - 1 = \square$	
7	$8 - 1 = \square$		22	$30 - 1 = \square$	
8	$18 - 1 = \square$		23	$20 - 1 = \square$	
9	$28 - 1 = \square$		24	$20 + \square = 21$	
10	$38 - 1 = \square$		25	$20 + \square = 30$	
11	$38 - 10 = \square$		26	$27 + \square = 37$	
12	$28 - 10 = \square$		27	$27 + \square = 28$	
13	$18 - 10 = \square$		28	$\square + 10 = 34$	
14	$9 + 10 = \square$		29	$\square - 10 = 14$	
15	$19 + 10 = \square$		30	$\square - 10 = 24$	

**B**

Number correct:




Name \_\_\_\_\_

Date \_\_\_\_\_

\*Write the missing number. Pay attention to the addition or subtraction sign.

1	$4 + 1 = \square$		16	$28 + 10 = \square$	
2	$14 + 1 = \square$		17	$9 + 1 = \square$	
3	$24 + 1 = \square$		18	$19 + 1 = \square$	
4	$6 + 10 = \square$		19	$29 + 1 = \square$	
5	$16 + 10 = \square$		20	$39 + 1 = \square$	
6	$26 + 10 = \square$		21	$40 - 1 = \square$	
7	$7 - 1 = \square$		22	$30 - 1 = \square$	
8	$17 - 1 = \square$		23	$20 - 1 = \square$	
9	$27 - 1 = \square$		24	$10 + \square = 11$	
10	$37 - 1 = \square$		25	$10 + \square = 20$	
11	$37 - 10 = \square$		26	$22 + \square = 32$	
12	$27 - 10 = \square$		27	$22 + \square = 23$	
13	$17 - 10 = \square$		28	$\square + 10 = 39$	
14	$8 + 10 = \square$		29	$\square - 10 = 19$	
15	$18 + 10 = \square$		30	$\square - 10 = 29$	

Number correct:



A

Name \_\_\_\_\_


Date \_\_\_\_\_

\*Write the number of dots. Try to find ways to group the dots to make counting easier!

1			16		
2			17		
3			18		
4			19		
5			20		
6			21		
7			22		
8			23		
9			24		
10			25		
11			26		
12			27		
13			28		
14			29		
15			30		

**B**

Number correct:




Name \_\_\_\_\_

Date \_\_\_\_\_

\*Write the number of dots. Try to find ways to group the dots to make counting easier!

1			16		
2			17		
3			18		
4			19		
5			20		
6			21		
7			22		
8			23		
9			24		
10			25		
11			26		
12			27		
13			28		
14			29		
15			30		



Name \_\_\_\_\_

Date \_\_\_\_\_

### Number Bond Dash!

**Directions:** Do as many as you can in 90 seconds. Write the amount you finished here:

1.	<div style="border: 1px solid black; padding: 5px; display: inline-block; text-align: center;">10</div> <div style="display: flex; justify-content: space-around; width: 100%;"> <div style="border: 1px solid black; padding: 5px; display: inline-block; text-align: center;">10</div> <div style="border: 1px solid black; width: 40px; height: 40px;"></div> </div>	2.	<div style="border: 1px solid black; padding: 5px; display: inline-block; text-align: center;">10</div> <div style="display: flex; justify-content: space-around; width: 100%;"> <div style="border: 1px solid black; padding: 5px; display: inline-block; text-align: center;">9</div> <div style="border: 1px solid black; width: 40px; height: 40px;"></div> </div>	3.	<div style="border: 1px solid black; padding: 5px; display: inline-block; text-align: center;">10</div> <div style="display: flex; justify-content: space-around; width: 100%;"> <div style="border: 1px solid black; padding: 5px; display: inline-block; text-align: center;">8</div> <div style="border: 1px solid black; width: 40px; height: 40px;"></div> </div>	4.	<div style="border: 1px solid black; padding: 5px; display: inline-block; text-align: center;">10</div> <div style="display: flex; justify-content: space-around; width: 100%;"> <div style="border: 1px solid black; padding: 5px; display: inline-block; text-align: center;">9</div> <div style="border: 1px solid black; width: 40px; height: 40px;"></div> </div>	5.	<div style="border: 1px solid black; padding: 5px; display: inline-block; text-align: center;">10</div> <div style="display: flex; justify-content: space-around; width: 100%;"> <div style="border: 1px solid black; padding: 5px; display: inline-block; text-align: center;">10</div> <div style="border: 1px solid black; width: 40px; height: 40px;"></div> </div>
6.	<div style="border: 1px solid black; padding: 5px; display: inline-block; text-align: center;">10</div> <div style="display: flex; justify-content: space-around; width: 100%;"> <div style="border: 1px solid black; width: 40px; height: 40px;"></div> <div style="border: 1px solid black; padding: 5px; display: inline-block; text-align: center;">9</div> </div>	7.	<div style="border: 1px solid black; padding: 5px; display: inline-block; text-align: center;">10</div> <div style="display: flex; justify-content: space-around; width: 100%;"> <div style="border: 1px solid black; width: 40px; height: 40px;"></div> <div style="border: 1px solid black; padding: 5px; display: inline-block; text-align: center;">8</div> </div>	8.	<div style="border: 1px solid black; padding: 5px; display: inline-block; text-align: center;">10</div> <div style="display: flex; justify-content: space-around; width: 100%;"> <div style="border: 1px solid black; width: 40px; height: 40px;"></div> <div style="border: 1px solid black; padding: 5px; display: inline-block; text-align: center;">7</div> </div>	9.	<div style="border: 1px solid black; padding: 5px; display: inline-block; text-align: center;">10</div> <div style="display: flex; justify-content: space-around; width: 100%;"> <div style="border: 1px solid black; width: 40px; height: 40px;"></div> <div style="border: 1px solid black; padding: 5px; display: inline-block; text-align: center;">8</div> </div>	10.	<div style="border: 1px solid black; padding: 5px; display: inline-block; text-align: center;">10</div> <div style="display: flex; justify-content: space-around; width: 100%;"> <div style="border: 1px solid black; width: 40px; height: 40px;"></div> <div style="border: 1px solid black; padding: 5px; display: inline-block; text-align: center;">7</div> </div>
11.	<div style="border: 1px solid black; padding: 5px; display: inline-block; text-align: center;">10</div> <div style="display: flex; justify-content: space-around; width: 100%;"> <div style="border: 1px solid black; padding: 5px; display: inline-block; text-align: center;">6</div> <div style="border: 1px solid black; width: 40px; height: 40px;"></div> </div>	12.	<div style="border: 1px solid black; padding: 5px; display: inline-block; text-align: center;">10</div> <div style="display: flex; justify-content: space-around; width: 100%;"> <div style="border: 1px solid black; padding: 5px; display: inline-block; text-align: center;">7</div> <div style="border: 1px solid black; width: 40px; height: 40px;"></div> </div>	13.	<div style="border: 1px solid black; padding: 5px; display: inline-block; text-align: center;">10</div> <div style="display: flex; justify-content: space-around; width: 100%;"> <div style="border: 1px solid black; padding: 5px; display: inline-block; text-align: center;">6</div> <div style="border: 1px solid black; width: 40px; height: 40px;"></div> </div>	14.	<div style="border: 1px solid black; padding: 5px; display: inline-block; text-align: center;">10</div> <div style="display: flex; justify-content: space-around; width: 100%;"> <div style="border: 1px solid black; padding: 5px; display: inline-block; text-align: center;">5</div> <div style="border: 1px solid black; width: 40px; height: 40px;"></div> </div>	15.	<div style="border: 1px solid black; padding: 5px; display: inline-block; text-align: center;">10</div> <div style="display: flex; justify-content: space-around; width: 100%;"> <div style="border: 1px solid black; padding: 5px; display: inline-block; text-align: center;">4</div> <div style="border: 1px solid black; width: 40px; height: 40px;"></div> </div>
16.	<div style="border: 1px solid black; padding: 5px; display: inline-block; text-align: center;">10</div> <div style="display: flex; justify-content: space-around; width: 100%;"> <div style="border: 1px solid black; width: 40px; height: 40px;"></div> <div style="border: 1px solid black; padding: 5px; display: inline-block; text-align: center;">6</div> </div>	17.	<div style="border: 1px solid black; padding: 5px; display: inline-block; text-align: center;">10</div> <div style="display: flex; justify-content: space-around; width: 100%;"> <div style="border: 1px solid black; width: 40px; height: 40px;"></div> <div style="border: 1px solid black; padding: 5px; display: inline-block; text-align: center;">4</div> </div>	18.	<div style="border: 1px solid black; padding: 5px; display: inline-block; text-align: center;">10</div> <div style="display: flex; justify-content: space-around; width: 100%;"> <div style="border: 1px solid black; width: 40px; height: 40px;"></div> <div style="border: 1px solid black; padding: 5px; display: inline-block; text-align: center;">3</div> </div>	19.	<div style="border: 1px solid black; padding: 5px; display: inline-block; text-align: center;">10</div> <div style="display: flex; justify-content: space-around; width: 100%;"> <div style="border: 1px solid black; width: 40px; height: 40px;"></div> <div style="border: 1px solid black; padding: 5px; display: inline-block; text-align: center;">4</div> </div>	20.	<div style="border: 1px solid black; padding: 5px; display: inline-block; text-align: center;">10</div> <div style="display: flex; justify-content: space-around; width: 100%;"> <div style="border: 1px solid black; width: 40px; height: 40px;"></div> <div style="border: 1px solid black; padding: 5px; display: inline-block; text-align: center;">3</div> </div>
21.	<div style="border: 1px solid black; padding: 5px; display: inline-block; text-align: center;">10</div> <div style="display: flex; justify-content: space-around; width: 100%;"> <div style="border: 1px solid black; padding: 5px; display: inline-block; text-align: center;">0</div> <div style="border: 1px solid black; width: 40px; height: 40px;"></div> </div>	22.	<div style="border: 1px solid black; padding: 5px; display: inline-block; text-align: center;">10</div> <div style="display: flex; justify-content: space-around; width: 100%;"> <div style="border: 1px solid black; padding: 5px; display: inline-block; text-align: center;">1</div> <div style="border: 1px solid black; width: 40px; height: 40px;"></div> </div>	23.	<div style="border: 1px solid black; padding: 5px; display: inline-block; text-align: center;">10</div> <div style="display: flex; justify-content: space-around; width: 100%;"> <div style="border: 1px solid black; padding: 5px; display: inline-block; text-align: center;">2</div> <div style="border: 1px solid black; width: 40px; height: 40px;"></div> </div>	24.	<div style="border: 1px solid black; padding: 5px; display: inline-block; text-align: center;">10</div> <div style="display: flex; justify-content: space-around; width: 100%;"> <div style="border: 1px solid black; padding: 5px; display: inline-block; text-align: center;">4</div> <div style="border: 1px solid black; width: 40px; height: 40px;"></div> </div>	25.	<div style="border: 1px solid black; padding: 5px; display: inline-block; text-align: center;">10</div> <div style="display: flex; justify-content: space-around; width: 100%;"> <div style="border: 1px solid black; padding: 5px; display: inline-block; text-align: center;">2</div> <div style="border: 1px solid black; width: 40px; height: 40px;"></div> </div>